






Name: _____



Date: _____



Write each sum.

 5 +  $3 =$



 4 +  $2 =$



 7 +  $3 =$

 7 +  $2 =$

 7 +  $4 =$

 8 +  $4 =$

 3 +  $2 =$

 7 +  $4 =$