







Name: \_\_\_\_\_

Date: \_\_\_\_\_



Write each sum.

 $6$  +  $5$  =



 $4$  +  $4$  =



 $6$  +  $4$  =

 $3$  +  $4$  =

 $7$  +  $5$  =

 $3$  +  $5$  =

 $6$  +  $5$  =

 $8$  +  $4$  =