



Name: \_\_\_\_\_


Date: \_\_\_\_\_

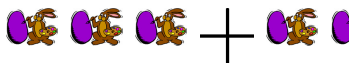
Write each sum.


 $8 + 2 =$


 $5 + 1 =$


 $4 + 2 =$

 $8 + 3 =$

 $3 + 2 =$

 $6 + 2 =$

 $4 + 1 =$

 $5 + 2 =$