

Name: _____



Date: _____

Addition



Write the addition sentences.

 $+$  $_____ + _____ = _____$

 $+$  $_____ + _____ = _____$

 $+$  $_____ + _____ = _____$

 $+$  $_____ + _____ = _____$

 $+$  $_____ + _____ = _____$

Name: _____

Date: _____

Addition



Write the addition sentences.

 $+$  $=$ $\underline{4}$ $+$ $\underline{5}$ $=$ $\underline{9}$

 $+$  $=$ $\underline{4}$ $+$ $\underline{4}$ $=$ $\underline{8}$

 $+$  $=$ $\underline{2}$ $+$ $\underline{2}$ $=$ $\underline{4}$

 $+$  $=$ $\underline{4}$ $+$ $\underline{3}$ $=$ $\underline{7}$

 $+$  $=$ $\underline{5}$ $+$ $\underline{2}$ $=$ $\underline{7}$