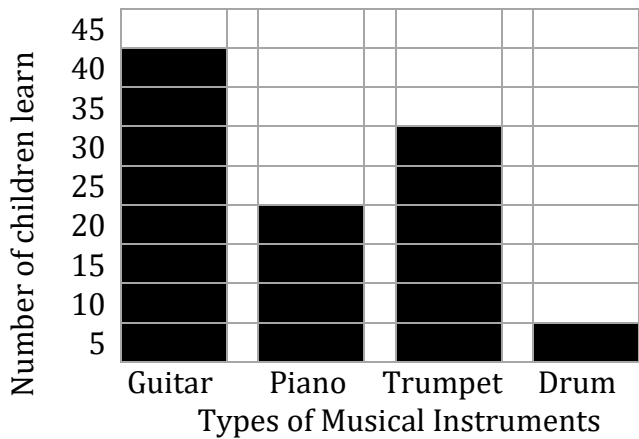


Bar Graph

Name: _____

Date: _____

Use the bar graph to answer the questions.

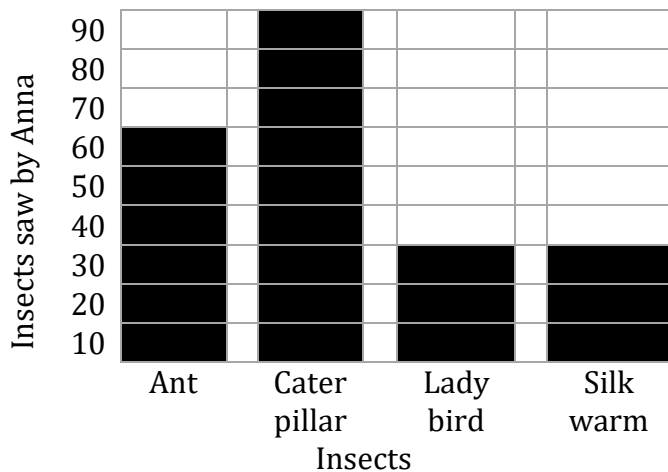


- Which music instrument has only ten more children learning it than Trumpet?

- Does the scale on this graph count by 1s, 2s, or 3s?

- If 40 more children learn Drum, which one will top the chart, Drum or Guitar?

- How many fewer kids learn Drum than Piano?




- Anna saw more Ants than the 2 least popular insects put together. True or False?

- Did she see more Silkworms or Ants?

- The number of Caterpillars saw by Anna is thrice of the Ladybirds. Is it correct?

- Which of the two types of insects that counts to 30 exactly?



- How many number of Salamanders found in the river?

- Which Amphibian is found 70 more than Toads?

- How many Amphibians are there in total?

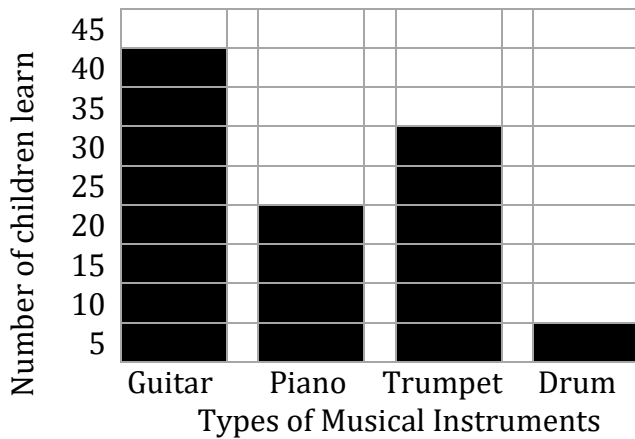
- Double the number of Caecilians was found in the river than the Frogs, True or False?

Bar Graph

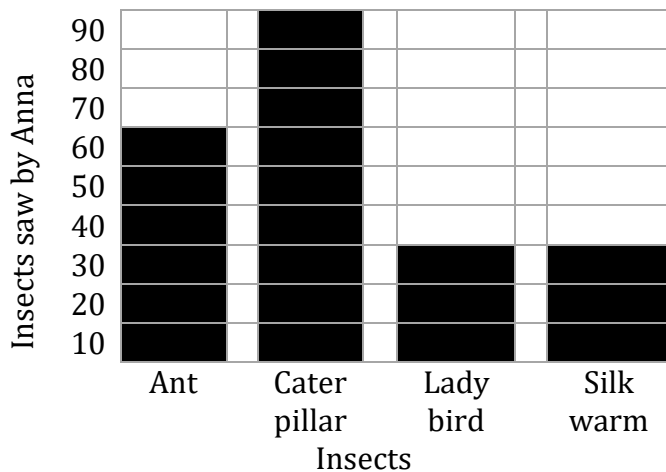
Name: _____

Date: _____


Use the bar graph to answer the questions.



- Which music instrument has only ten more children learning it than Trumpet?
Guitar
- Does the scale on this graph count by 1s, 2s, or 3s?
No, Scale on this graph count by 5s
- If 40 more children learn Drum, which one will top the chart, Drum or Guitar?
Drum
- How many fewer kids learn Drum than Piano?
15



- Anna saw more Ants than the 2 least popular insects put together. True or False?
True
- Did she see more Silkworms or Ants?
Ants
- The number of Caterpillars saw by Anna is thrice of the Ladybirds. Is it correct?
Yes
- Which of the two types of insects that counts to 30 exactly?
Ladybird, Silkworm



- How many number of Salamanders found in the river?
140
- Which Amphibian is found 70 more than Toads?
Salamander
- How many Amphibians are there in total?
340
- Double the number of Caecilians was found in the river than the Frogs, True or False?
False