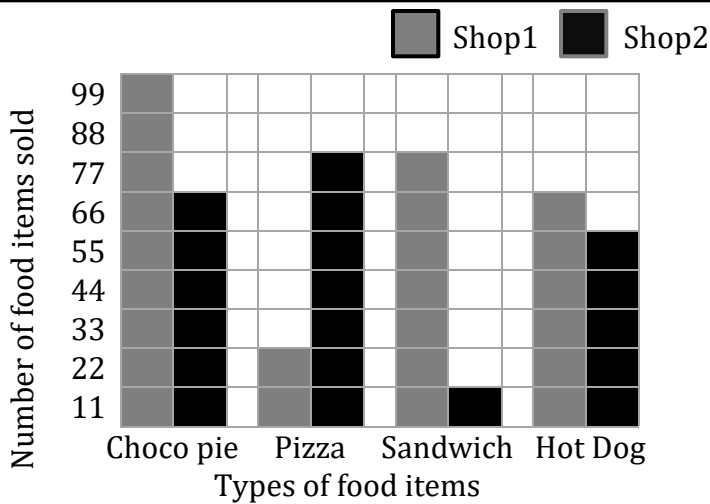


Bar Graph

Name: _____

Date: _____

Use the bar graph to answer the questions.



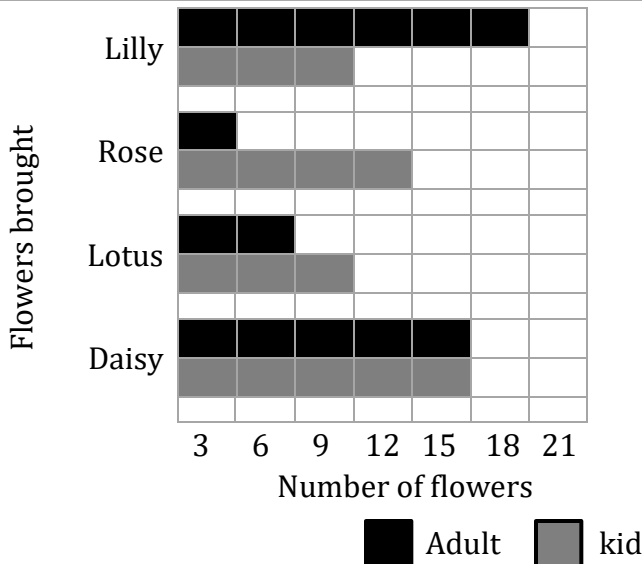
Cost: Choco pie -10\$, Pizza-2\$, Sandwich-9\$, Hotdog-5\$

- 1) How much Pizza and Hotdog did they sell in total?

- 2) The most amount of money was got at which shop?

- 3) The number of Choco Pies sold at shop1 is twice of shop2. Is it correct?

- 4) What kind of food item was most popular? How much was sold?

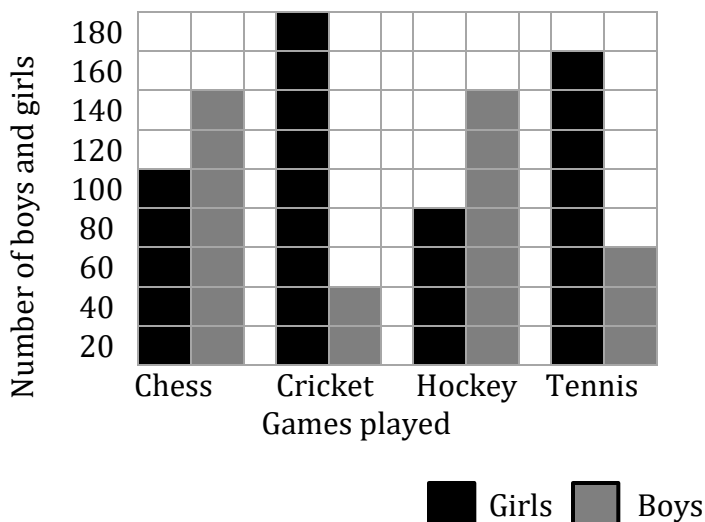


- 1) Which flower is the most popular in total?

- 2) How many more Roses brought by kids than adults?

- 3) Does the scale on this graph count by 1s, 2s, or 3s?

- 4) How many flowers did they bring in total?



- 1) How many boys choose Chess, Cricket and Tennis as their favorite?

- 2) Which two games had the same number of votes by boys?

- 3) How many few girls play Chess than Tennis?

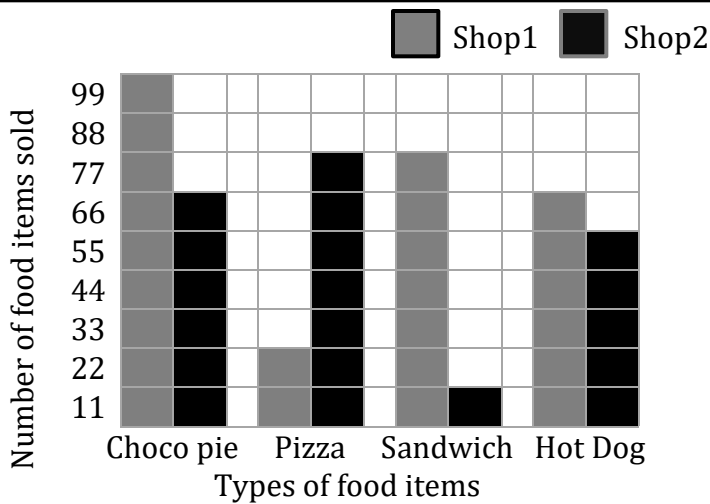
- 4) List the games in order, from most played to least played by girls?

Bar Graph

Name: _____

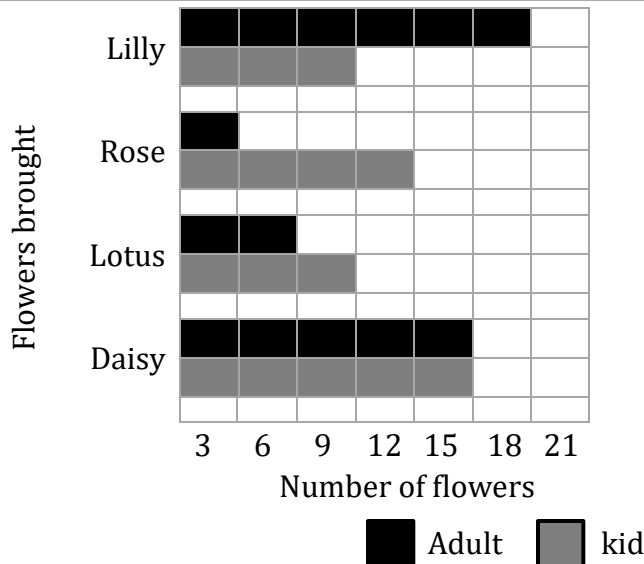
Date: _____

Use the bar graph to answer the questions.

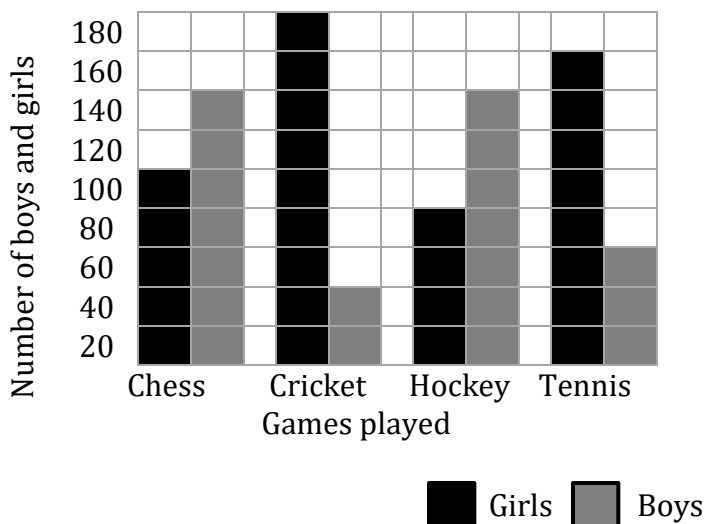


Cost: Choco pie -10\$, Pizza-2\$, Sandwich-9\$, Hotdog-5\$

- How much Pizza and Hotdog did they sell in total?
803\$
- The most amount of money was got at which shop?
Shop1
- The number of Choco Pies sold at shop1 is twice of shop2. Is it correct?
No
- What kind of food item was most popular? How much was sold?
Choco Pies, 1,650\$



- Which flower is the most popular in total?
Daisy
- How many more Roses brought by kids than adults?
9
- Does the scale on this graph count by 1s, 2s, or 3s?
3s
- How many flowers did they bring in total?
87



- How many boys choose Chess, Cricket and Tennis as their favorite?
240
- Which two games had the same number of votes by boys?
Chess and Hockey
- How many few girls play Chess than Tennis?
60
- List the games in order, from most played to least played by girls?
Cricket, Tennis, Chess, and Hockey