

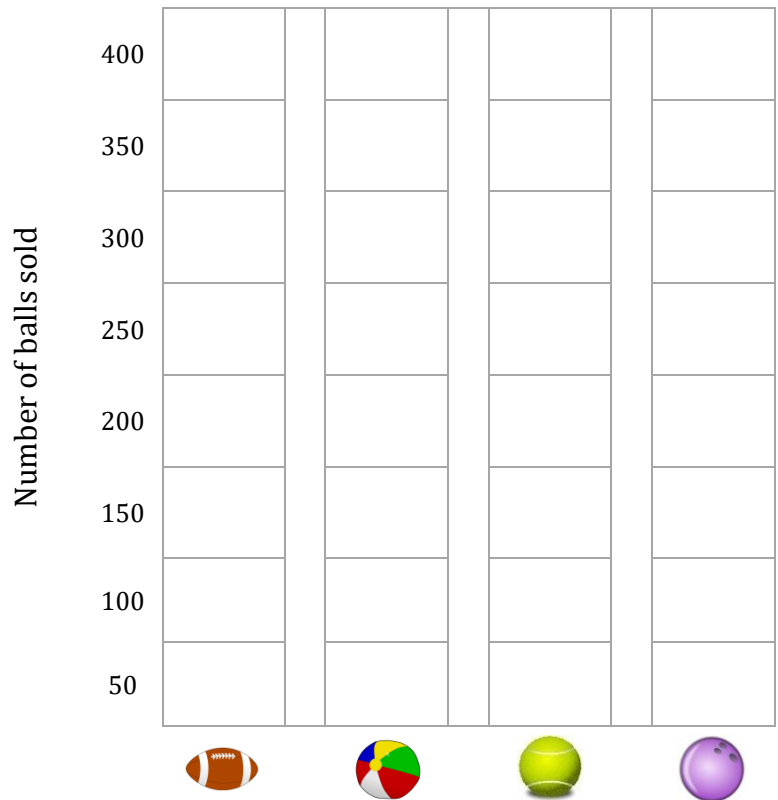
Bar Graph

Name: _____

Date: _____

Use the chart below to color in the graph showing balls sale. Use **brown** for rugby ball, **yellow** for beach ball, **green** for tennis ball and **purple** for bowling ball.

	150
	250
	400
	100



1) Which ball that sold the most?

2) How many tennis balls more than beach balls did they sold?

3) Write the names that they sold less than 250 balls.

4) Find the total number of balls sold?

5) How many types of balls are there?

☐ 3

☐ 1

☐ 4



☐ 2

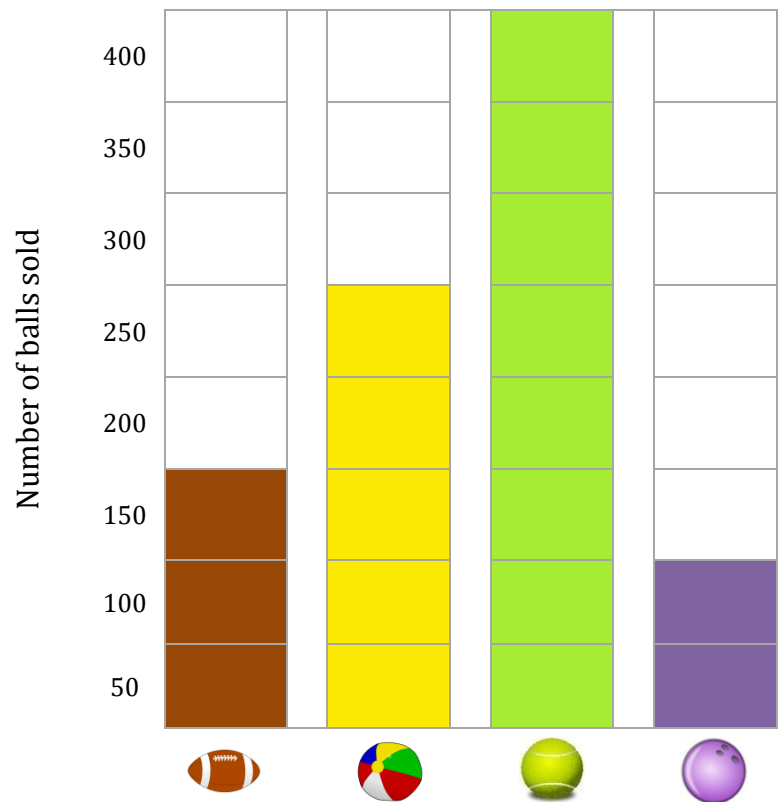
Bar Graph

Name: _____

Date: _____

Use the chart below to color in the graph showing balls sale. Use **brown** for rugby ball, **yellow** for beach ball, **green** for tennis ball and **purple** for bowling ball.

	150
	250
	400
	100



- 1) Which ball that sold the most?

Tennis ball

- 2) How many tennis balls more than beach balls did they sold?

150

- 3) Write the names that they sold less than 250 balls.

Rugby ball and bowling ball

- 4) Find the total number of balls sold?

900

- 5) How many types of balls are there?

☐ 3

☐ 1

☒ 4

☐ 2