






Bar Graph

Name: _____

Date: _____

Sam counts the number of fruits in the basket and creates a bar graph. Answer the questions using bar graph.

| | | | | |
|---|---|---|---|---|
|  |  |  |  |  |
| 8 | 12 | 8 | 28 | 36 |



Answer the questions:

- 1) How many fruits are there altogether?

| | |
|--------------------------|--------------------------|
| <input type="radio"/> 40 | <input type="radio"/> 76 |
| <input type="radio"/> 92 | <input type="radio"/> 67 |

- 2) How many more oranges are there than apples?

| | |
|--------------------------|--------------------------|
| <input type="radio"/> 12 | <input type="radio"/> 20 |
| <input type="radio"/> 22 | <input type="radio"/> 24 |

- 3) How many pineapples and acorns are there altogether?

| | |
|--------------------------|--------------------------|
| <input type="radio"/> 25 | <input type="radio"/> 20 |
| <input type="radio"/> 21 | <input type="radio"/> 23 |

- 4) Which fruit is more in number?

| | |
|---------------------------------|----------------------------------|
| <input type="radio"/> Apple | <input type="radio"/> Orange |
| <input type="radio"/> Pineapple | <input type="radio"/> Strawberry |

- 5) What are the fruits counts to the least?






| | |
|---|---|
| <input type="radio"/> Apple and Pineapple | <input type="radio"/> Orange and Strawberry |
| <input type="radio"/> Acorn and Orange | <input type="radio"/> Pineapple and Acorn |

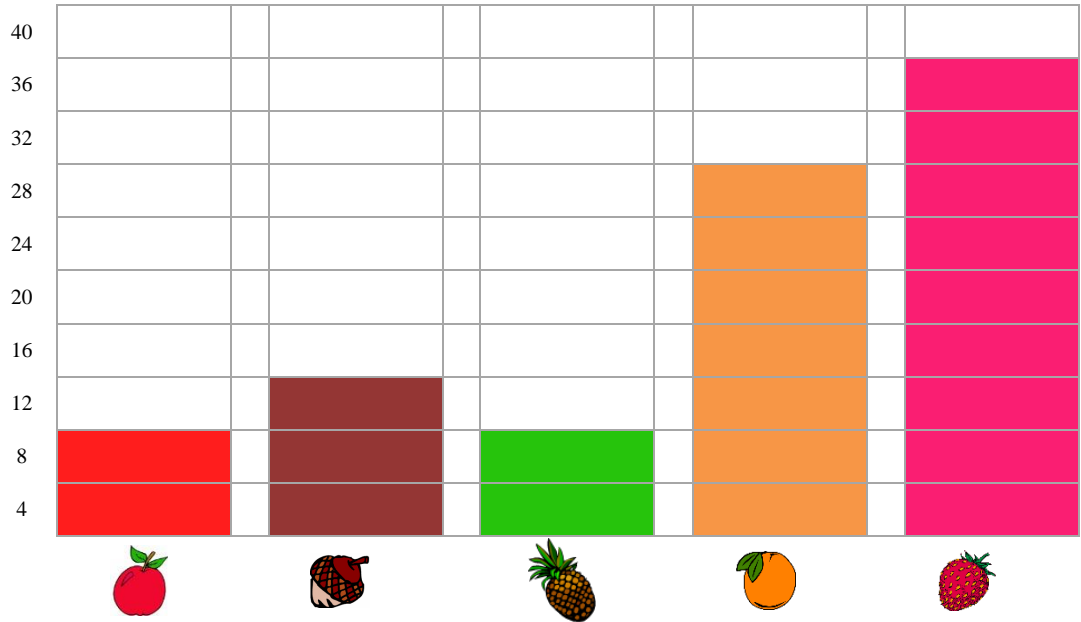
Bar Graph

Name: _____

Date: _____

Sam counts the number of fruits in the basket and creates a bar graph. Answer the questions using bar graph.

| | | | | |
|---|---|---|---|---|
|  |  |  |  |  |
| 8 | 12 | 8 | 28 | 36 |



Answer the questions:

- 1) How many fruits are there altogether?
 - 40
 - 92
 - 76
 - 67

- 2) How many more oranges are there than apples?
 - 12
 - 22
 - 20
 - 24

- 3) How many pineapples and acorns are there altogether?
 - 25
 - 21
 - 20
 - 23

- 4) Which fruit is more in number?
 - Apple
 - Pineapple
 - Orange
 - Strawberry

- 5) What are the fruits counts to the least?
 - Apple and Pineapple
 - Acorn and Orange
 - Orange and Strawberry
 - Pineapple and Acorn