

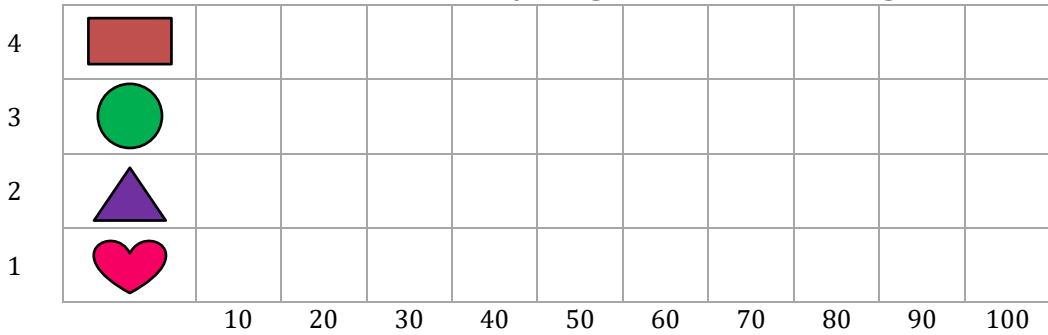
Shapes Bar Graph

Name: _____

Date: _____

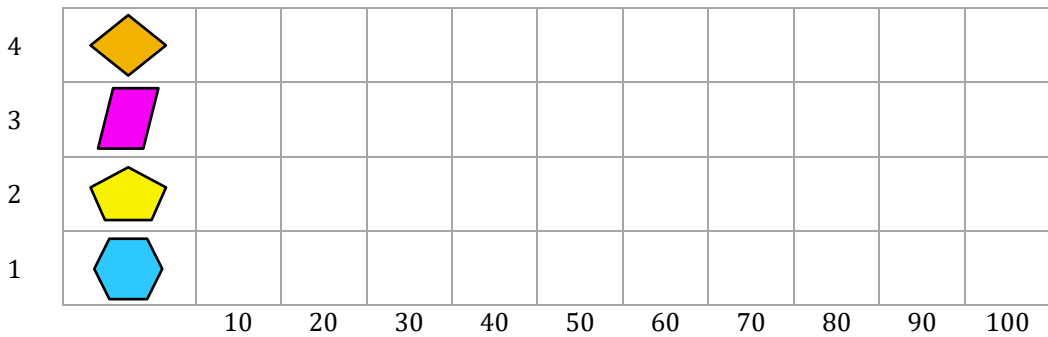
Use the bar graph to answer the questions.

Jackson collected 50 rectangle images, 60 circle images, 20 triangle images and 90 heart images. How many images did he collect altogether?



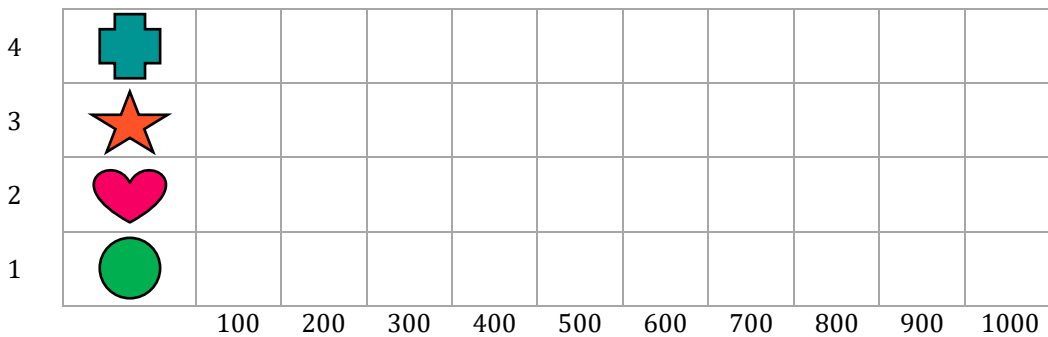
_____ Shapes

Sophia brought 60 diamond shapes, 80 parallelogram shapes, 30 pentagon shapes and 100 hexagon shapes. How many shapes did she bring altogether?



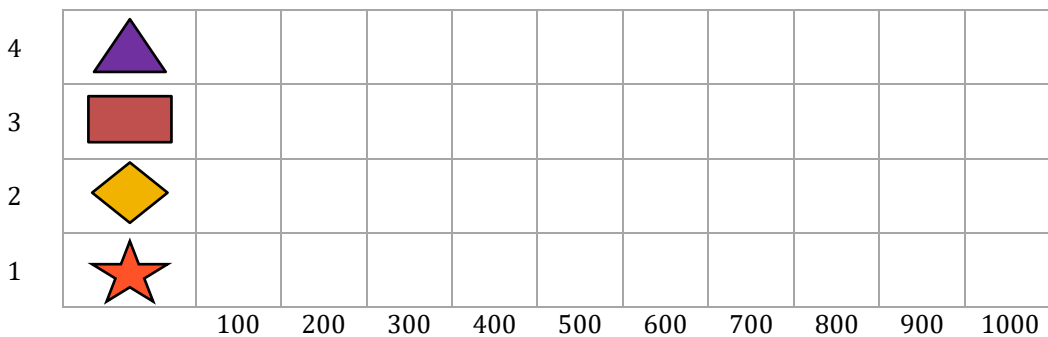
_____ Shapes

Students in a school voted for their favorite shapes are 400 cross shapes, 700 star shapes, 500 heart shapes and 900 circle shapes. How many voted altogether?



_____ Shapes

Ryan buys are 300 triangle shapes, 800 rectangle shapes, 900 diamond shapes and 700 star shape toys. How many toys did he buy altogether?



_____ Shapes

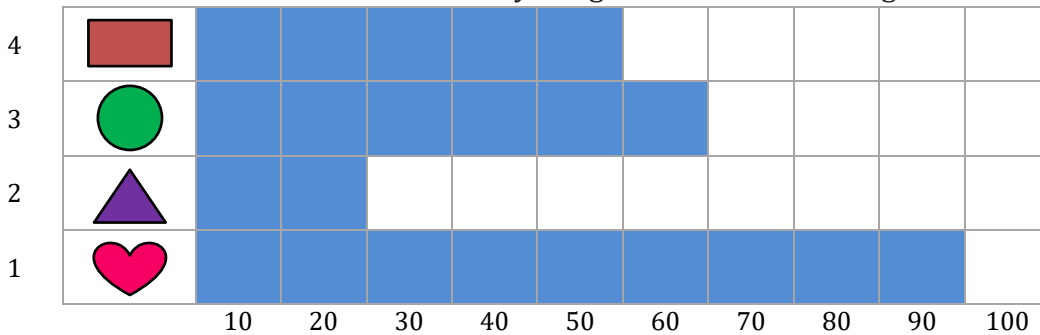
Shapes Bar Graph

Name: _____

Date: _____

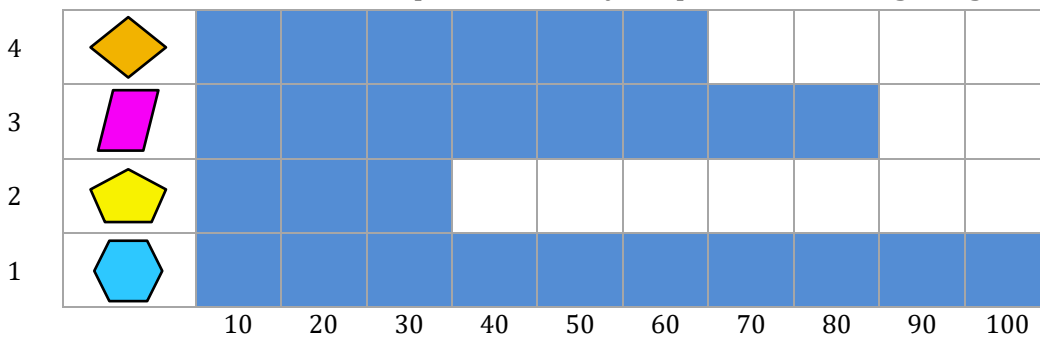
Use the bar graph to answer the questions.

Jackson collected 50 rectangle images, 60 circle images, 20 triangle images and 90 heart images. How many images did he collect altogether?



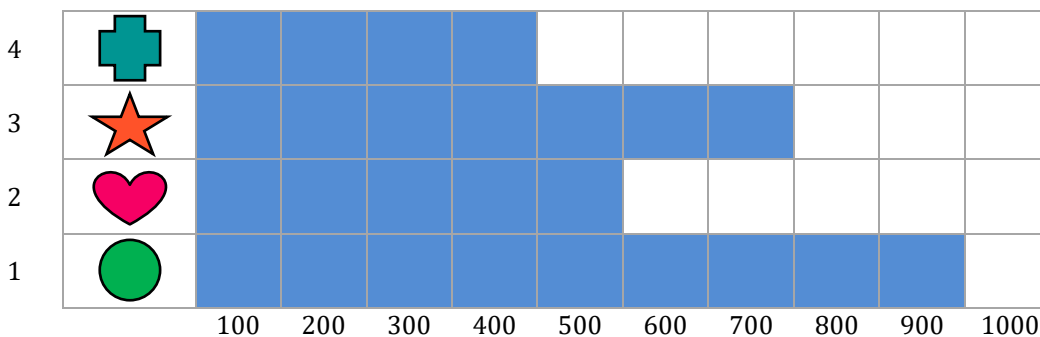
220 Shapes

Sophia brought 60 diamond shapes, 80 parallelogram shapes, 30 pentagon shapes and 100 hexagon shapes. How many shapes did she bring altogether?



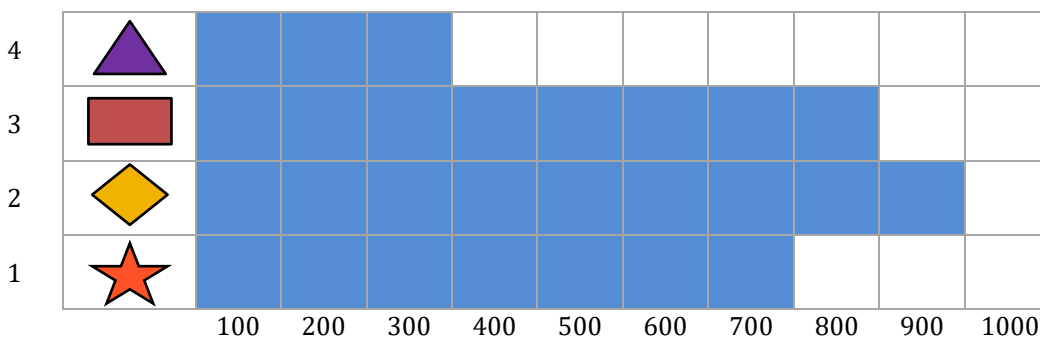
270 Shapes

Students in a school voted for their favorite shapes are 400 cross shapes, 700 star shapes, 500 heart shapes and 900 circle shapes. How many voted altogether?



2500 Shapes

Ryan buys are 300 triangle shapes, 800 rectangle shapes, 900 diamond shapes and 700 star shape toys. How many toys did he buy altogether?



2700 Shapes