

Matching Bar graphs

Name: _____

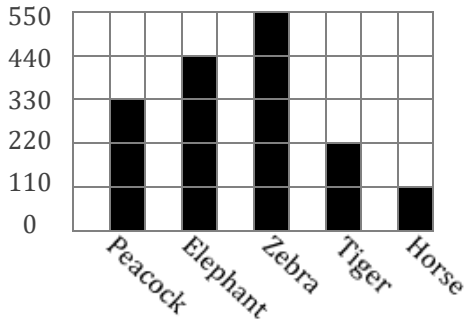
Date: _____

Determine which bar graph best represents the information in the chart.


1)

Name of animals	Peacock	Elephant	Zebra	Tiger	Horse
Number of animals in Zoo	330	440	550	220	110

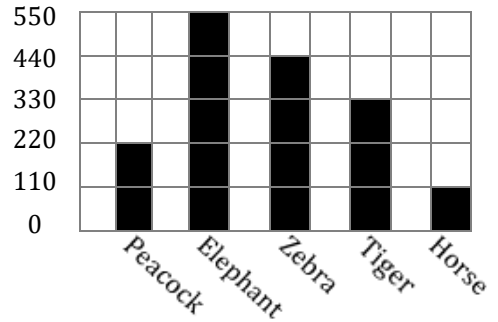
A)



B)



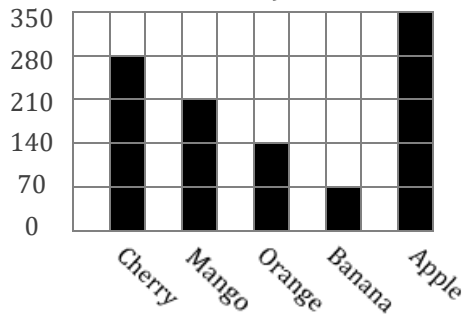
C)



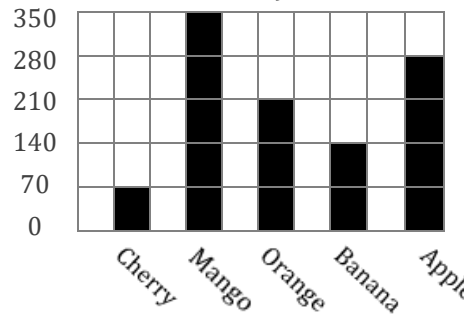
2)

Favorite fruit	Cherry	Mango	Orange	Banana	Apple
Number of kids	280	210	140	70	350


A)



B)



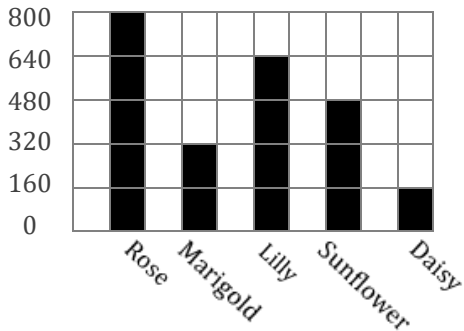
C)



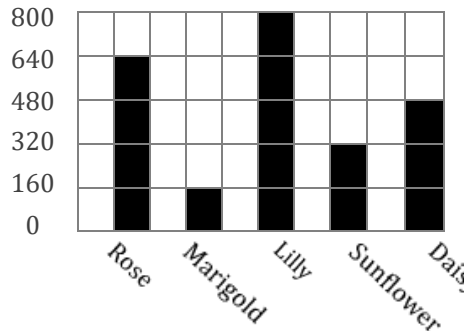
3)

Flowers in garden	Rose	Marigold	Lilly	Sunflower	Daisy
Number of plants	640	160	800	320	480

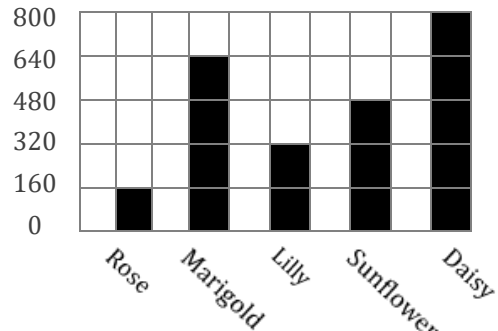
A)



B)



C)



Answers:

1) → _____

2) → _____

3) → _____

Matching Bar graphs

Name: _____

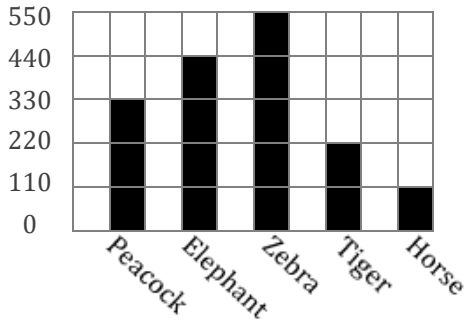
Date: _____

Determine which bar graph best represents the information in the chart.


1)

Name of animals	Peacock	Elephant	Zebra	Tiger	Horse
Number of animals in Zoo	330	440	550	220	110

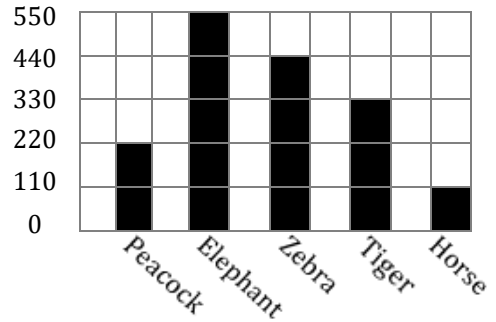
A)



B)



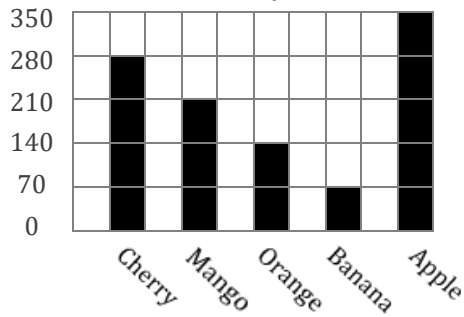
C)



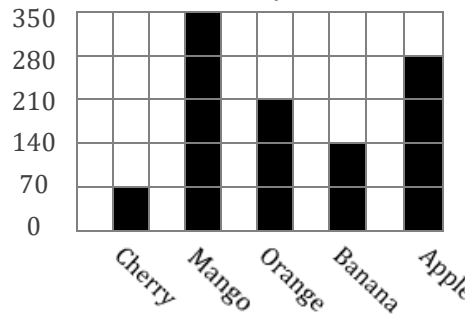
2)

Favorite fruit	Cherry	Mango	Orange	Banana	Apple
Number of kids	280	210	140	70	350

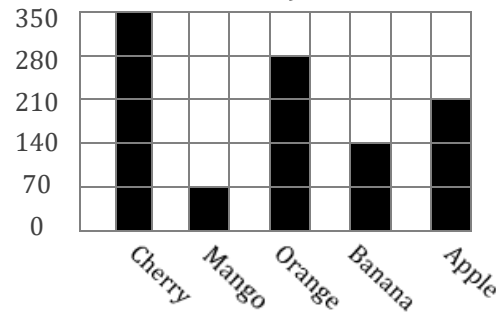
A)



B)



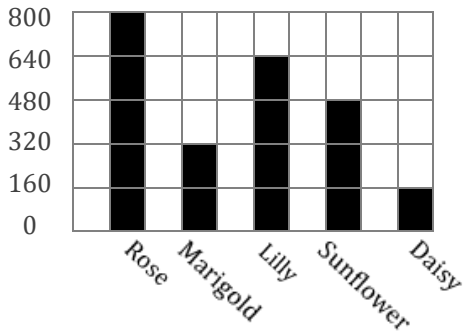
C)



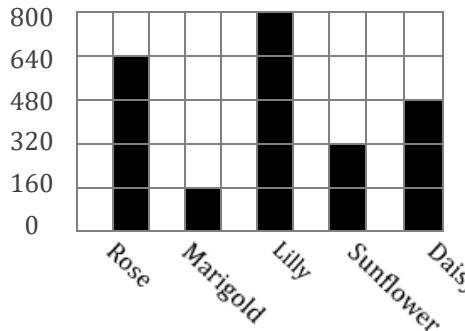
3)

Flowers in garden	Rose	Marigold	Lilly	Sunflower	Daisy
Number of plants	640	160	800	320	480

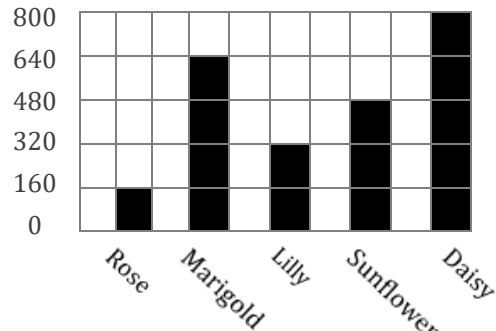
A)



B)



C)



Answers:

1) → A

2) → A

3) → B