

Matching Bar graphs

Name: _____

Date: _____

Determine which bar graph best represents the information in the chart.

1)

Shapes	Number of Shapes
Circle	20000
Square	15000
Triangle	10000
Rectangle	5000

2)

Shapes	Number of Shapes
Circle	15000
Square	10000
Triangle	5000
Rectangle	20000

3)

Shapes	Number of Shapes
Circle	5000
Square	15000
Triangle	20000
Rectangle	10000

4)

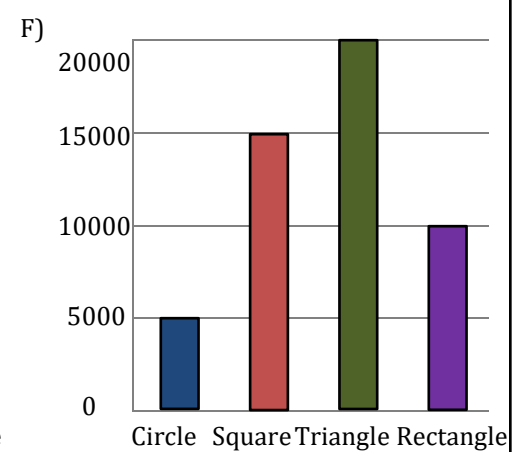
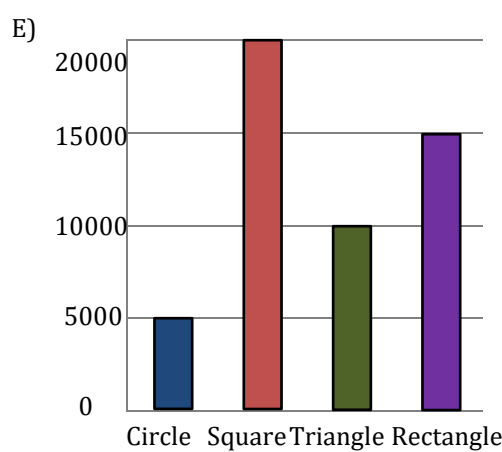
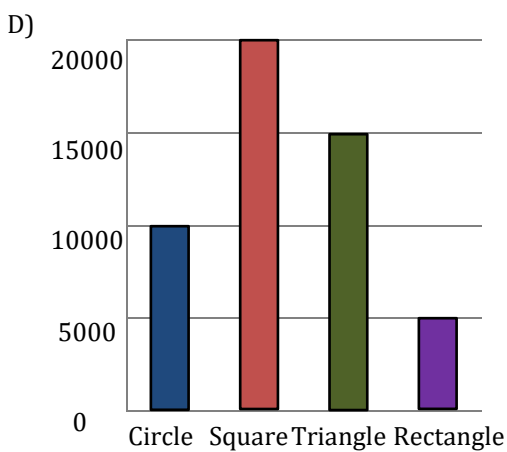
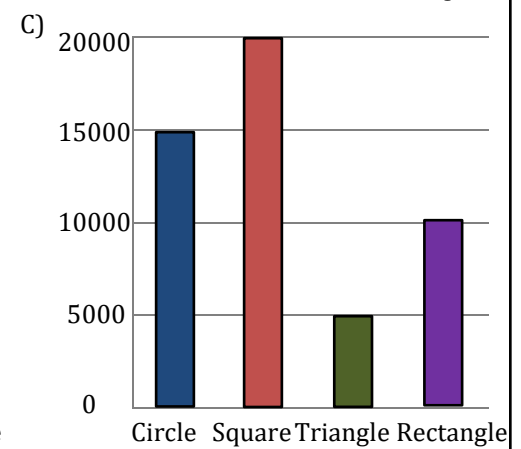
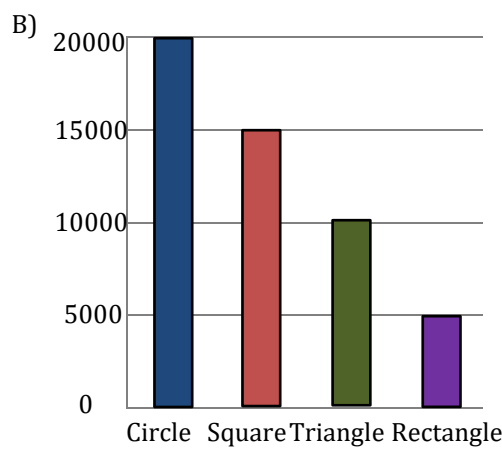
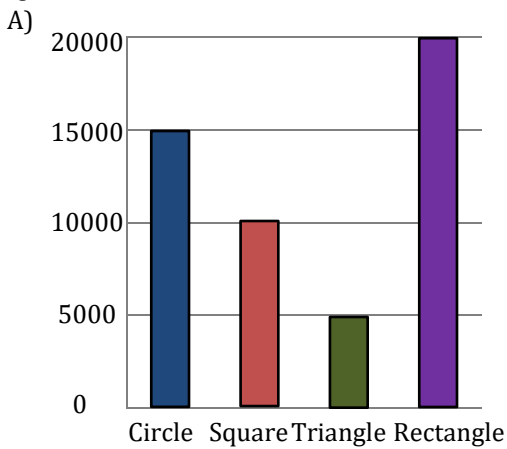
Shapes	Number of Shapes
Circle	5000
Square	20000
Triangle	10000
Rectangle	15000

5)

Shapes	Number of Shapes
Circle	15000
Square	20000
Triangle	5000
Rectangle	10000

6)

Shapes	Number of Shapes
Circle	10000
Square	20000
Triangle	15000
Rectangle	5000



Answers:

1) → _____

2) → _____

3) → _____

4) → _____

5) → _____

6) → _____

Matching Bar graphs

Name: _____

Date: _____

Determine which bar graph best represents the information in the chart.

1)

Shapes	Number of Shapes
Circle	20000
Square	15000
Triangle	10000
Rectangle	5000

2)

Shapes	Number of Shapes
Circle	15000
Square	10000
Triangle	5000
Rectangle	20000

3)

Shapes	Number of Shapes
Circle	5000
Square	15000
Triangle	20000
Rectangle	10000

4)

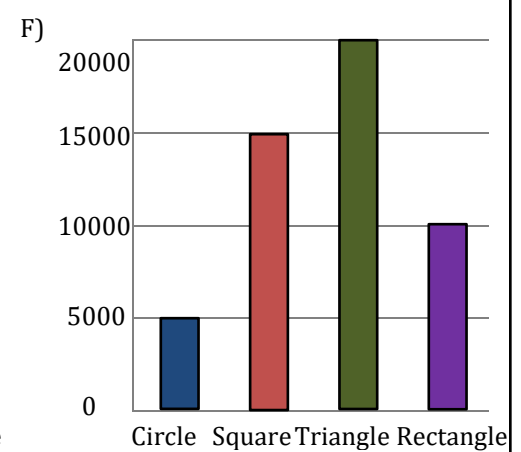
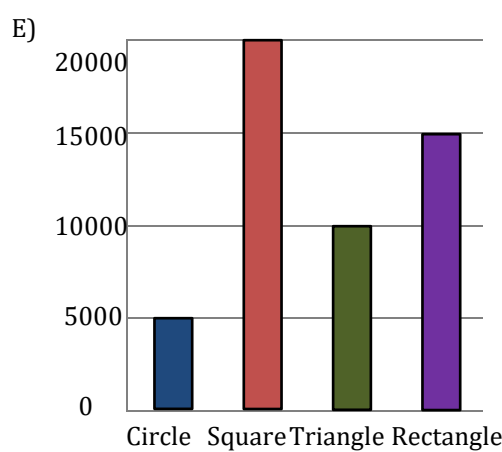
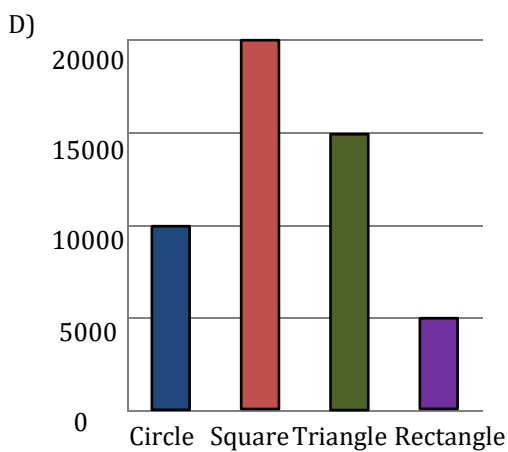
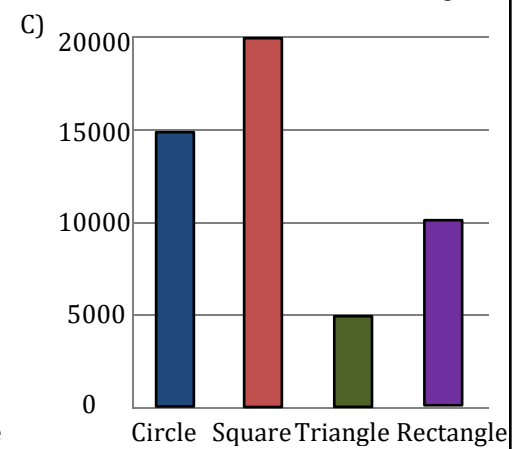
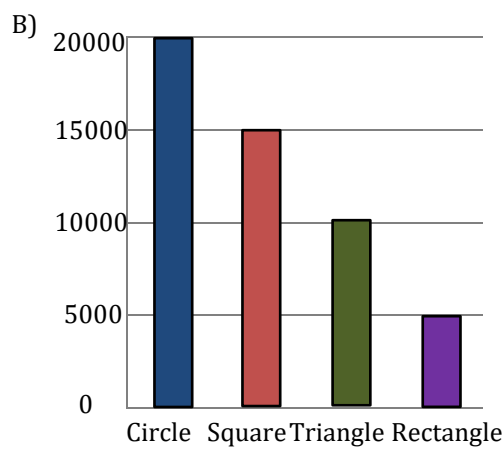
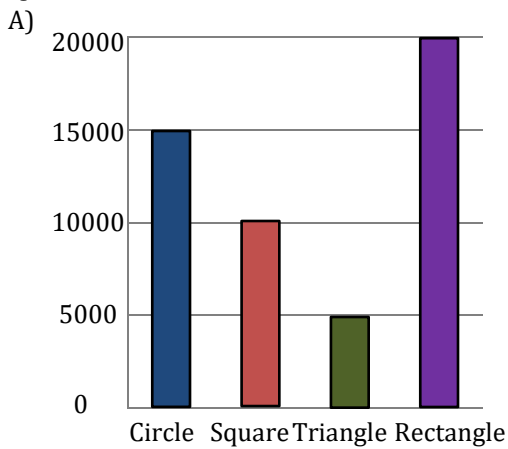
Shapes	Number of Shapes
Circle	5000
Square	20000
Triangle	10000
Rectangle	15000

5)

Shapes	Number of Shapes
Circle	15000
Square	20000
Triangle	5000
Rectangle	10000

6)

Shapes	Number of Shapes
Circle	10000
Square	20000
Triangle	15000
Rectangle	5000



Answers:

1) → B

2) → A

3) → F

4) → E

5) → C

6) → D