

Bar Graph

Name: _____

Date: _____

The students in the class wrote their most favorite color. Each student wrote 1 color.

students favorite colors

Red	Yellow
Blue	Green
Red	Yellow
Blue	Green
Red	Yellow
Green	Green
Red	Yellow
Yellow	Yellow

Write the Count in the chart.


Red	Yellow	Blue	Green

1) Did more students like blue or red?

2) Which color did the most students like?

3) Did more students like green or yellow?

4) Which color did the least students like?



The list below shows the different food items students brought for the lunch. Each box is equal to 5 boxes.

students favorite food

Pizza	Tofu
Pasta	Donut
Pizza	Pasta
Pasta	Donut
Pizza	Tofu
Pasta	Donut
Pizza	Pasta
Pasta	Donut

Write the Count in the chart.


Pizza	Tofu	Donut	Pasta
4 x 5			

1) Which item did the least students bring?

2) Did more students bring pasta or donut?

3) Which two items had the same number?

4) Which item did the most students bring?



Bar Graph

Name: _____

Date: _____

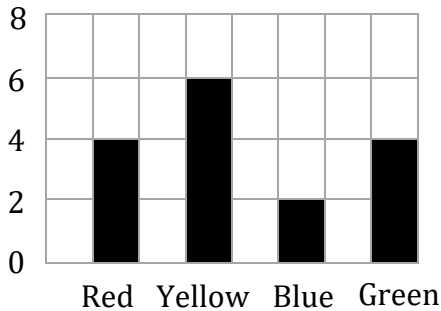
The students in the class wrote their most favorite color. Each student wrote 1 color.

students favorite colors

Red	Yellow
Blue	Green
Red	Yellow
Blue	Green
Red	Yellow
Green	Green
Red	Yellow
Yellow	Yellow

Write the Count in the chart.

Red	Yellow	Blue	Green
4	6	2	4



- 1) Did more students like blue or red?
Red

- 2) Which color did the most students like?
Yellow

- 3) Did more students like green or yellow?
Yellow

- 4) Which color did the least students like?
Blue

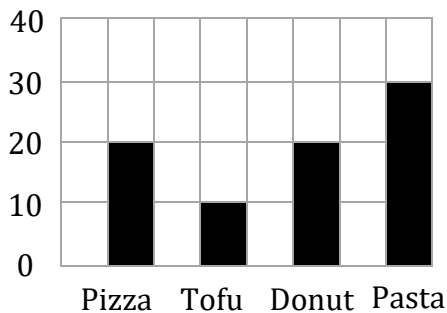
The list below shows the different food items students brought for the lunch. Each box is equal to 5 boxes.

students favorite food

Pizza	Tofu
Pasta	Donut
Pizza	Pasta
Pasta	Donut
Pizza	Tofu
Pasta	Donut
Pizza	Pasta
Pasta	Donut

Write the Count in the chart.

Pizza	Tofu	Donut	Pasta
4 x 5	2 x 5	4 x 5	6 x 5



- 1) Which item did the least students bring?
Tofu

- 2) Did more students bring pasta or donut?
Pasta

- 3) Which two items had the same number?
Pizza and Donut

- 4) Which item did the most students bring?
Pasta
