


Bar Graph


Name: _____

Date: _____

Kids went to the zoo and counted how many of each type of wild animals they saw in the zoo. Make the tally marks and write the number to answer the questions.



Types of animals	Tally marks	Numbers
elephant		
kangaroo		
zebra		
camel		
lion		



1) Are there more lion or zebra?

2) How many animals are there in the above graph?

3) Which animal counts to 6?

4) What are the animals that count to 8?


5) Children saw 3 more kangaroos and 2 more camels then what will be the count?

Bar Graph

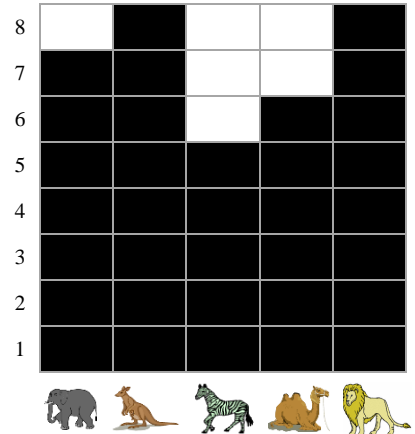
Name: _____

Date: _____

Kids went to the zoo and counted how many of each type of wild animals they saw in the zoo. Make the tally marks and write the number to answer the questions.



Types of animals	Tally marks	Numbers
elephant		7
kangaroo		8
zebra		5
camel		6
lion		8



1) Are there more lion or zebra?

Lion

2) How many animals are there in the above graph?

34

3) Which animal counts to 6?

Camel

4) What are the animals that count to 8?

Kangaroo and Lion

5) Children saw 3 more kangaroos and 2 more camels then what will be the count?

19