


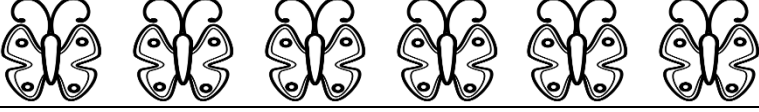



Pictograph - Butterflies

Name: _____


Date: _____

Macy plays in the garden every day. She counts the butterflies each day and records the information in a table. Help her to represent the data in the pictograph and answer the questions.

Day 1	Day 2	Day 3	Day 4	Day 5
16	12	8	10	4

Butterflies in the Garden	
Day	Number of butterflies
Day 1	
Day 2	
Day 3	
Day 4	
Day 5	

Hint


= 2 butterflies

- 1) Which day does she see 16 butterflies? _____ Day 1

- 2) How many butterflies does Macy see on Day 2 and Day 5? _____

- 3) On which day does Macy see fewest butterflies? _____

- 4) When does Macy see more butterflies, Day 3 or Day 4? _____

- 5) How many butterflies does Macy see on Day 3? _____



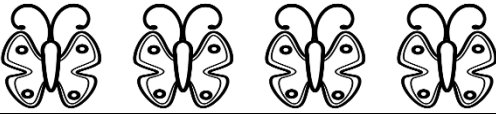


Pictograph - Butterflies

Name: _____


Date: _____

Macy plays in the garden every day. She counts the butterflies each day and records the information in a table. Help her to represent the data in the pictograph and answer the questions.

Day 1	Day 2	Day 3	Day 4	Day 5
16	12	8	10	4

Butterflies in the Garden	
Day	Number of butterflies
Day 1	
Day 2	
Day 3	
Day 4	
Day 5	

Hint



= 2 butterflies

- | | |
|---|-------------|
| 1) Which day does she see 16 butterflies? | _____ Day 1 |
| 2) How many butterflies does Macy see on Day 2 and Day 5? | _____ 16 |
| 3) On which day does Macy see fewest butterflies? | _____ Day 5 |
| 4) When does Macy see more butterflies, Day 3 or Day 4? | _____ Day 4 |
| 5) How many butterflies does Macy see on Day 3? | _____ 8 |