


Stationary Pictograph



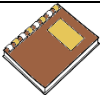


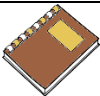









Name: _____


Date: _____





















These two pictographs are comparing two types of stationary items imported from Canada. Answer the questions below using information from the pictograph.



Day	Number of books
Monday	  
Tuesday	   
Wednesday	 
Thursday	    
Friday	



Hint
= 1500 books

Day	Number of pencils
Monday	   
Tuesday	  
Wednesday	    
Thursday	   
Friday	 



Hint
= 3000 pencils

Questions:

- 1) How many more books were imported on Thursday than Monday?

Answer: _____

- 2) How many pencils were imported from Monday to Wednesday?

Answer: _____

- 3) Which of the two days did they import fewer books?

Answer: _____

- 4) How many pencils did they import altogether?

Answer: _____

- 5) How many more books need to be import on Friday to be equal to those pencils imported on Monday?

Answer: _____


- 6) How many pencils were imported on Wednesday and Thursday altogether?

Answer: _____

Stationary Pictograph



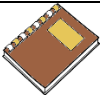


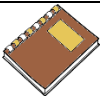









Name: _____

Date: _____





















These two pictographs are comparing two types of stationary items imported from Canada. Answer the questions below using information from the pictograph.



Day	Number of books
Monday	  
Tuesday	   
Wednesday	 
Thursday	    
Friday	



Hint
= 1500 books

Day	Number of pencils
Monday	   
Tuesday	  
Wednesday	    
Thursday	   
Friday	 



Hint
= 3000 pencils

Questions:

1) How many more books were imported on Thursday than Monday?

Answer: 3,000 books

2) How many pencils were imported from Monday to Wednesday?

Answer: 36,000 pencils

3) Which of the two days did they import fewer books?

Answer: Wednesday and Friday

4) How many pencils did they import altogether?

Answer: 54,000 pencils

5) How many more books need to be import on Friday to be equal to those pencils imported on Monday?

Answer: 10,500 books

6) How many pencils were imported on Wednesday and Thursday altogether?

Answer: 27,000 pencils