

Vehicles Pictograph






Name: _____






Date: _____





Count how many miles travelled by the car and jeep shown in the box below. Answer the questions below using information from the pictograph.



Day	Number of Jeeps
Monday	
Tuesday	
Wednesday	
Thursday	
Friday	

Day	Number of Cars
Monday	
Tuesday	
Wednesday	
Thursday	
Friday	

Hint
 = 5 miles

Hint
 = 2 miles

Questions:

- How many miles travelled by car in total on Tuesday and Wednesday?
Answer: 10 miles
- What is the distance travelled by jeep in total?
Answer: _____
- On which day the Jeep travelled less miles?
Answer: _____
- Total miles travelled by car is
Answer: _____
- How many miles travelled by jeep in total on Monday?
Answer: _____
- On which day the car travelled more miles?
Answer: _____

Vehicles Pictograph

Name: _____

Date: _____



Count how many miles travelled by the car and jeep shown in the box below. Answer the questions below using information from the pictograph.



Day	Number of Jeeps
Monday	
Tuesday	
Wednesday	
Thursday	
Friday	

Day	Number of Cars
Monday	
Tuesday	
Wednesday	
Thursday	
Friday	

Hint
 = 5 miles

Hint
 = 2 miles

Questions:

- How many miles travelled by car in total on Tuesday and Wednesday?
 Answer: 10 miles
- What is the distance travelled by jeep in total?
 Answer: 75 miles
- On which day the Jeep travelled less miles?
 Answer: Thursday
- Total miles travelled by car is
 Answer: 30 miles
- How many miles travelled by jeep in total on Monday?
 Answer: 15 miles
- On which day the car travelled more miles?
 Answer: Monday