

Flowers Pictograph






Name: _____

Date: _____

A teacher asked all the students in his class about their favorite flowers. The pictures below show the favorite flowers of the students. Use the information to answer the questions.



1) Complete the Data table

5	7	4	5	7
				

2) How many flowers are there in total?

3) How many students like roses?

4) Is daisy and Marigold are same in number?

5) How many students like sunflower over hibiscus?

Flowers Pictograph






Name: _____

Date: _____

A teacher asked all the students in his class about their favorite flowers. The pictures below show the favorite flowers of the students. Use the information to answer the questions.



1) Complete the Data table

5	7	4	5	7
				

2) How many flowers are there in total?

28 Flowers

3) How many students like roses?

7 students

4) Is daisy and Marigold are same in number?

Yes

5) How many students like sunflower over hibiscus?

3 students
