

Pictograph - Flowers

Name: _____

Date: _____

Barbie has a habit of plucking flowers from her aunt's garden. Draw pictograph to represent the data and answer the questions.

Monday - 18 boxes







Tuesday - 12 boxes

Wednesday - 21 boxes


Thursday - 15 boxes

Friday - 9 boxes

Saturday - 24 boxes

Flower Plucking	
Day	Number of Flowers
Monday	
Tuesday	
Wednesday	
Thursday	
Friday	
Saturday	

Hint



= 3 Flowers

- 1) How many flowers did Barbie pluck on Saturday? _____
- 2) How many did Barbie pluck in all? _____
- 3) Were more flowers plucked on Tuesday or Friday? _____
- 4) How many more flowers did Sylvia pluck on Saturday than Monday? _____
- 5) How many flowers did Barbie pluck on Friday? _____

Pictograph - Flowers

Name: _____

Date: _____

Barbie has a habit of plucking flowers from her aunt's garden. Draw pictograph to represent the data and answer the questions.

Monday - 18 boxes







Tuesday - 12 boxes

Wednesday - 21 boxes


Thursday - 15 boxes

Friday - 9 boxes

Saturday - 24 boxes

Flower Plucking	
Day	Number of Flowers
Monday	
Tuesday	
Wednesday	
Thursday	
Friday	
Saturday	

Hint



= 3 Flowers

- 1) How many flowers did Barbie pluck on Saturday?
24
- 2) How many did Barbie pluck in all?
99
- 3) Were more flowers plucked on Tuesday or Friday?
Tuesday
- 4) How many more flowers did Sylvia pluck on Saturday than Monday?
6
- 5) How many flowers did Barbie pluck on Friday?
9