

Pictograph - Fruits

Name: _____

Date: _____

Six Girl Scouts sold fruits for one week. The list below shows how many boxes were sold by each Girl Scout.

Alice - 15 boxes































Barbara - 10 boxes

Barbie - 35 boxes

Karol - 20 boxes

Macy - 40 boxes

Grace - 30 boxes

| Fruits Sales | |
|--------------|--|
| Name | Number of Fruits |
| Alice |    |
| Barbara |   |
| Barbie |        |
| Karol |     |
| Macy |         |
| Grace |       |

Hint



= 5 Fruits

- How many boxes of fruits did the girls sell in all? _____
- Which two girls sold a total of 65 boxes of fruits? _____
- How many more boxes of fruits did Macy sell than Barbara? _____
- Half of the fruits sold by Karol were Apple. How many boxes of Apple did Karol sell? _____
- Who has the lowest number of fruit boxes? _____

Pictograph - Fruits

Name: _____

Date: _____

Six Girl Scouts sold fruits for one week. The list below shows how many boxes were sold by each Girl Scout.

Alice - 15 boxes































Barbara - 10 boxes

Barbie - 35 boxes

Karol - 20 boxes

Macy - 40 boxes

Grace - 30 boxes

| Fruits Sales | |
|--------------|--|
| Name | Number of Fruits |
| Alice |    |
| Barbara |   |
| Barbie |        |
| Karol |     |
| Macy |         |
| Grace |       |

Hint



= 5 Fruits

- How many boxes of fruits did the girls sell in all? 150
- Which two girls sold a total of 65 boxes of fruits? Barbie, Grace
- How many more boxes of fruits did Macy sell than Barbara? 30
- Half of the fruits sold by Karol were Apple. How many boxes of Apple did Karol sell? 10
- Who has the lowest number of fruit boxes? Barbara