

# Pictograph - Ice cream

Name: \_\_\_\_\_

Date: \_\_\_\_\_

**Mrs. Gale and Mr. Agustin are planning a party for their classes. The students are asked to vote for their favorite ice cream flavor. The list below is the results.**

Chocolate - 4 boxes




























Choco Cherry - 10 boxes

Chocolate Brownie - 8 boxes


Vanilla - 14 boxes

Chocolate Chip - 6 boxes

Toasted Almond - 12 boxes

Ice Cream	
Flavor	Number of votes
Chocolate	 
Choco Cherry	    
Chocolate Brownie	   
Vanilla	      
Chocolate Chip	  
Toasted Almond	     

Hint


= 2 boxes

- 1) How many votes were there in all? \_\_\_\_\_
  
- 2) How many more students voted for Vanilla than Chocolate? \_\_\_\_\_
  
- 3) How many students voted for either Toasted Almond or Chocolate Brownie? \_\_\_\_\_
  
- 4) What two flavors did the students like the least? \_\_\_\_\_
  
- 5) which flavor is the highest? \_\_\_\_\_

# Pictograph - Ice cream

Name: \_\_\_\_\_

Date: \_\_\_\_\_

**Mrs. Gale and Mr. Agustin are planning a party for their classes. The students are asked to vote for their favorite ice cream flavor. The list below is the results.**

Chocolate - 4 boxes




























Choco Cherry - 10 boxes

Chocolate Brownie - 8 boxes


Vanilla - 14 boxes

Chocolate Chip - 6 boxes

Toasted Almond - 12 boxes

Ice Cream	
Flavor	Number of votes
Chocolate	 
Choco Cherry	    
Chocolate Brownie	   
Vanilla	      
Chocolate Chip	  
Toasted Almond	     

Hint

 = 2 boxes

- 1) How many votes were there in all? \_\_\_\_\_ 54
- 2) How many more students voted for Vanilla than Chocolate? \_\_\_\_\_ 10
- 3) How many students voted for either Toasted Almond or Chocolate Brownie? \_\_\_\_\_ 20
- 4) What two flavors did the students like the least? \_\_\_\_\_ Chocolate, Chocolate Chip
- 5) which flavor is the highest? \_\_\_\_\_ Vanilla