

Matching Pictographs

Name: _____

Date: _____

Determine which pictograph best represents the information in the chart.

1)

Day	Smiles Earned
Thursday	4
Friday	20
Saturday	8
Sunday	24

2)

Day	Smiles Earned
Thursday	8
Friday	12
Saturday	16
Sunday	20

3)

Day	Smiles Earned
Thursday	4
Friday	16
Saturday	24
Sunday	12

4)

Day	Smiles Earned
Thursday	12
Friday	20
Saturday	8
Sunday	4

5)

Day	Smiles Earned
Thursday	16
Friday	12
Saturday	4
Sunday	24

6)

Day	Smiles Earned
Thursday	4
Friday	20
Saturday	12
Sunday	8

A)

Day	Smiles Earned
Thursday	
Friday	
Saturday	
Sunday	

B)

Day	Smiles Earned
Thursday	
Friday	
Saturday	
Sunday	

C)

Day	Smiles Earned
Thursday	
Friday	
Saturday	
Sunday	

D)

Day	Smiles Earned
Thursday	
Friday	
Saturday	
Sunday	

E)

Day	Smiles Earned
Thursday	
Friday	
Saturday	
Sunday	

F)

Day	Smiles Earned
Thursday	
Friday	
Saturday	
Sunday	

Hint
Each = 4 smiles

Answers:

1) → C

2) →

3) →

4) →

5) →

6) →

Matching Pictographs

Name: _____

Date: _____

Determine which pictograph best represents the information in the chart.

1)

Day	Smiles Earned
Thursday	4
Friday	20
Saturday	8
Sunday	24

2)

Day	Smiles Earned
Thursday	8
Friday	12
Saturday	16
Sunday	20

3)

Day	Smiles Earned
Thursday	4
Friday	16
Saturday	24
Sunday	12

4)

Day	Smiles Earned
Thursday	12
Friday	20
Saturday	8
Sunday	4





5)

Day	Smiles Earned
Thursday	16
Friday	12
Saturday	4
Sunday	24





6)

Day	Smiles Earned
Thursday	4
Friday	20
Saturday	12
Sunday	8





A)

Day	Smiles Earned
Thursday	
Friday	
Saturday	
Sunday	





B)

Day	Smiles Earned
Thursday	
Friday	
Saturday	
Sunday	





C)

Day	Smiles Earned
Thursday	
Friday	
Saturday	
Sunday	





D)


Day	Smiles Earned
Thursday	
Friday	
Saturday	
Sunday	

E)

Day	Smiles Earned
Thursday	
Friday	
Saturday	
Sunday	

F)

Day	Smiles Earned
Thursday	
Friday	
Saturday	
Sunday	

Hint
Each  = 4 smiles

Answers:

1) → C

2) → A

3) → D

4) → F

5) → B

6) → E