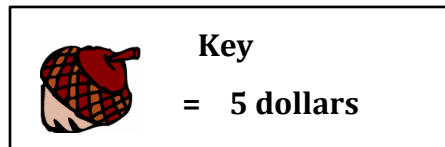
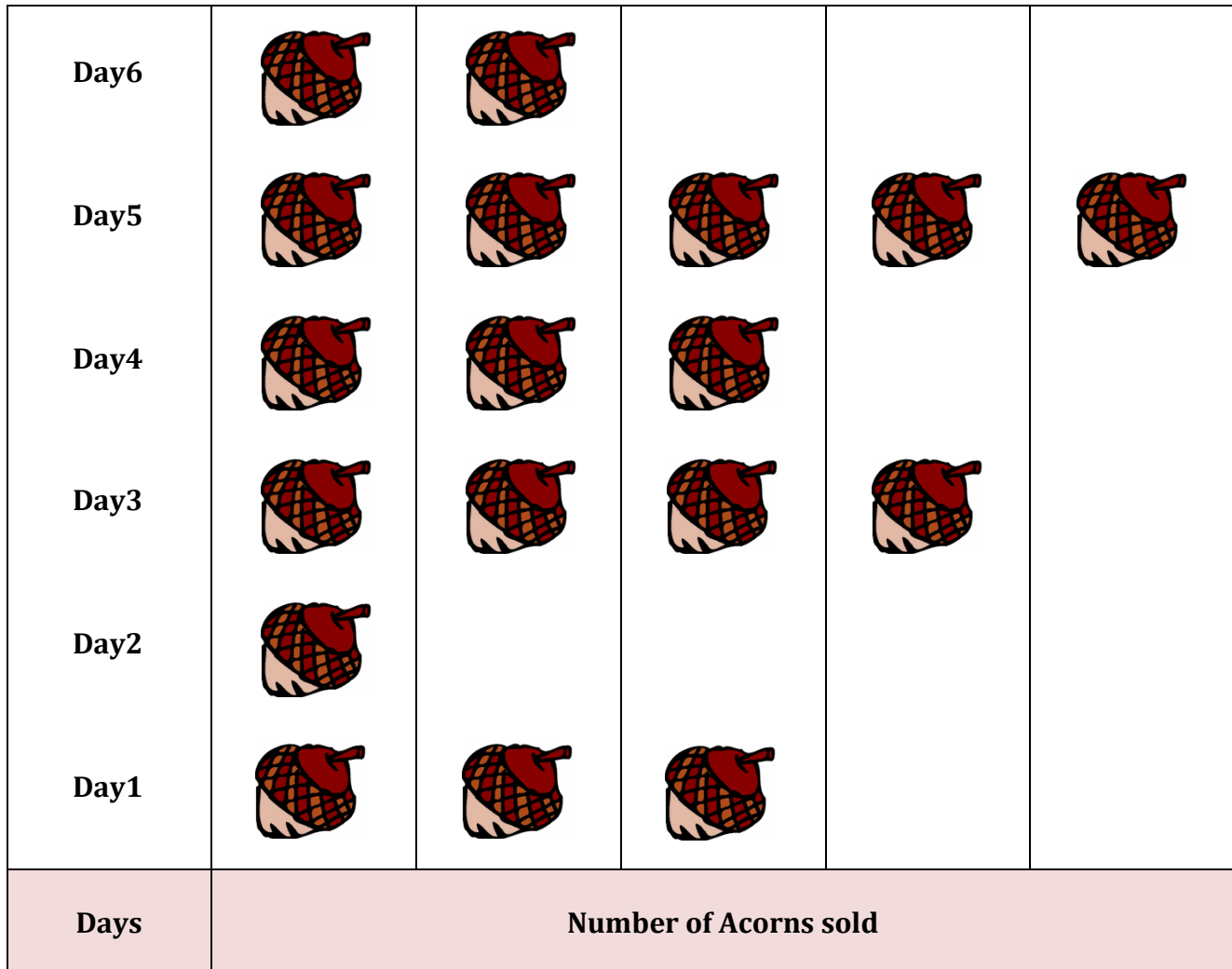


# Pictograph - Acorns

Name: \_\_\_\_\_

Date: \_\_\_\_\_

The Pictograph shows the number of Acorns sold by a shopkeeper. Use the graph to answer the questions.



- 1) How many Acorns were sold on first day?
 

4
 5
 2
 3
  
- 2) How much amount of Acorns were sold on Day3?
 

25 dollars
 20 dollars
 3 dollars
 10 dollars
  
- 3) What day did the more Acorns were sold?
 

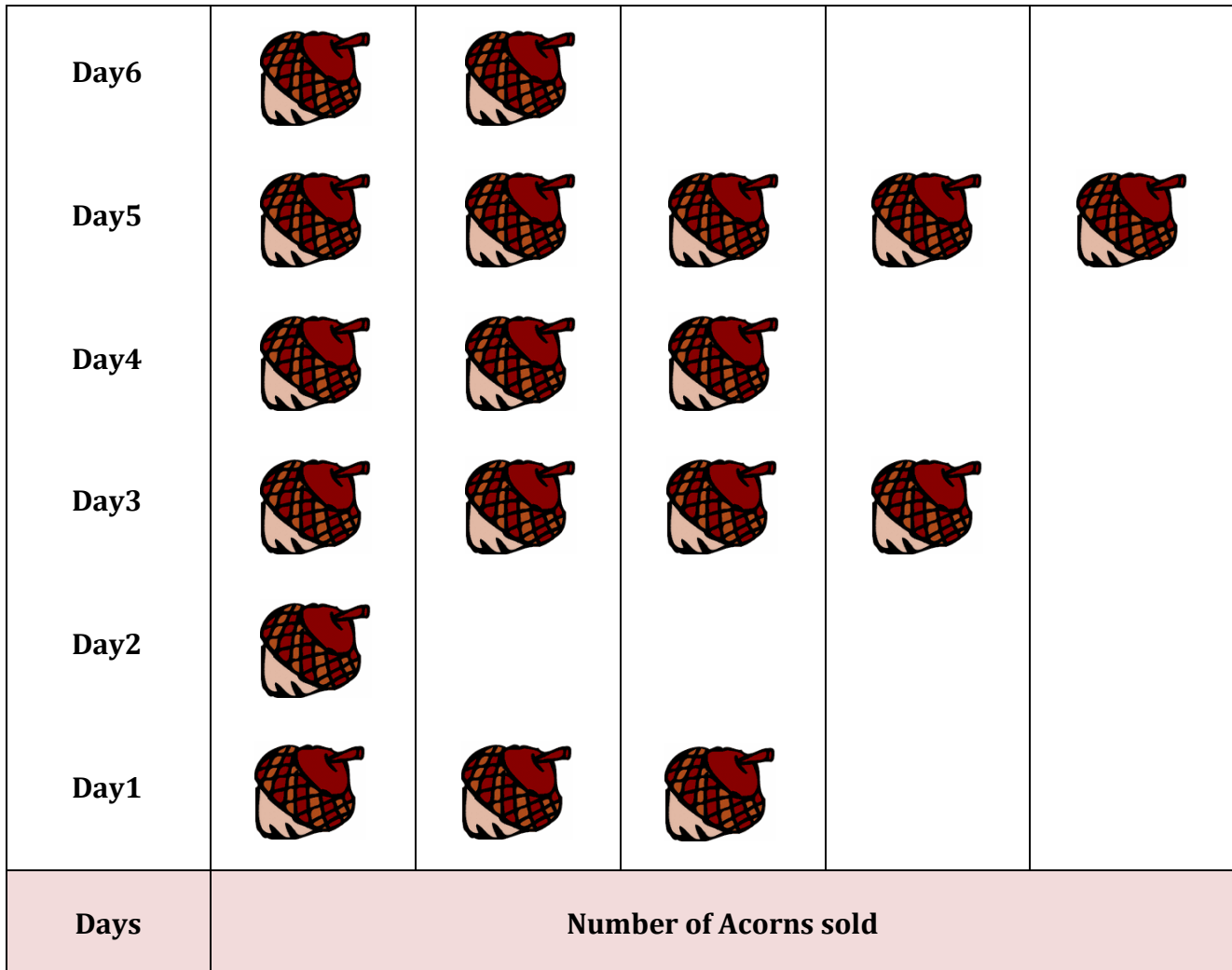
Day3
 Day1
 Day5
 Day4


# Pictograph - Acorns

Name: \_\_\_\_\_

Date: \_\_\_\_\_

The Pictograph shows the number of Acorns sold by a shopkeeper. Use the graph to answer the questions.





**Key**

**= 5 dollars**

- 1) How many Acorns were sold on first day?
 

4
 5
 2
 3
  
- 2) How much amount of Acorns were sold on Day3?
 

25 dollars
 20 dollars
 3 dollars
 10 dollars
  
- 3) What day did the more Acorns were sold?
 

Day3
 Day1
 Day5
 Day4