





# Tally Chart

Name: \_\_\_\_\_

Date: \_\_\_\_\_

Use the tally chart to answer the questions.

1) How many pizzas and donuts are there in all?





\_\_\_\_\_

2) How many more sandwiches than hot dogs?

\_\_\_\_\_

3) How many Bakery items shown in total?

\_\_\_\_\_

1) How many students like sunflower over morning glory?





\_\_\_\_\_

2) Is dahlia and morning glory are same in number?

\_\_\_\_\_

3) How many flowers are there in total?

\_\_\_\_\_

1) Which game has least players?

\_\_\_\_\_

2) If 3 more players are there for chess then what is the total count of the players (for all games)?

\_\_\_\_\_

3) If 4 more players are there for maze game, then which games has more number of player's cricket or maze





\_\_\_\_\_

# Tally Chart

Name: \_\_\_\_\_

Date: \_\_\_\_\_

Use the tally chart to answer the questions.

1) How many pizzas and donuts are there in all?





23

2) How many more sandwiches than hot dogs?

5

3) How many Bakery items shown in total?

68

1) How many students like sunflower over morning glory?





7

2) Is dahlia and morning glory are same in number?

No

3) How many flowers are there in total?

32

1) Which game has least players?

Tennis

2) If 3 more players are there for chess then what is the total count of the players (for all games)?

59

3) If 4 more players are there for maze game, then which games has more number of player's cricket or maze

Maze