







Tally Chart


Name: _____

Date: _____

Kids went to the old MacDonald's farm and counted how many of each type of farm animals they saw in the farm. Make the tally chart and write the number to answer the questions.



| Types of animals | Tally marks | Numbers |
|--|-------------|---------|
|  cow | | |
|  dog | | |
|  pig | | |
|  cat | | |
|  sheep | | |



1) How many total number of farm animals are there?

2) How many dogs, pigs and sheep's are there altogether?

3) How many more cows are there than cats?

4) Which animal is less in number?


5) Which of the two animals are equal in number?






Tally Chart


Name: _____

Date: _____

Kids went to the old MacDonald's farm and counted how many of each type of farm animals they saw in the farm. Make the tally chart and write the number to answer the questions.



| Types of animals | Tally marks | Numbers |
|--|-------------|---------|
|  cow | | 7 |
|  dog | | 8 |
|  pig | | 6 |
|  cat | | 5 |
|  sheep | | 8 |



1) How many total number of farm animals are there?

34

2) How many dogs, pigs and sheep's are there altogether?

22

3) How many more cows are there than cats?

2

4) Which animal is less in number?

Cat

5) Which of the two animals are equal in number?

Dog and Sheep