






Tally Chart

Name: _____






Date: _____

Different kinds of balls that kids brought to play. Answer the questions using tally chart.

Balls	Tally Marks
	
	
	
	
	

Fill the blanks using tally chart:

1)

				
9				

- 2) There are 2 rugby balls than beach balls?
- 3) If there are 9 bowling balls and your friend had taking 3 balls. Then _____ balls left with you?
- 4) There are 6 beach balls. Sam gave 20 more balls. Then _____ balls are there?
- 5) According to the above table how many more tennis balls than soccer balls are there?

- 6) Which ball counts to 8?






<input type="radio"/> Soccer ball	<input type="radio"/> Bowling ball
<input type="radio"/> Beach ball	<input type="radio"/> Rugby ball

Tally Chart

Name: _____






Date: _____

Different kinds of balls that kids brought to play. Answer the questions using tally chart.

Balls	Tally Marks
	
	
	
	
	

Fill the blanks using tally chart:

1)

				
9	8	6	5	10

- 2) There are 2 rugby balls than beach balls?
- 3) If there are 9 bowling balls and your friend had taking 3 balls. Then 6 balls left with you?
- 4) There are 6 beach balls. Sam gave 20 more balls. Then 26 balls are there?
- 5) According to the above table how many more tennis balls than soccer balls are there?
5
- 6) Which ball counts to 8?

<input type="radio"/> Soccer ball	<input type="radio"/> Bowling ball
<input type="radio"/> Beach ball	<input checked="" type="radio"/> Rugby ball