






### Tally Chart

Name: \_\_\_\_\_

Date:\_\_\_\_\_

**A School took a survey on the number of musical instrument brought by the students and recorded the data. Answer the questions using tally chart.**

Music	Tally Marks
	
	
	
	
	

**Fill the blanks using tally chart:**

1)

- 2) There are \_\_\_\_\_ drums than flutes?
- 3) If there are 39 pianos and your friend had taking 19 pianos. Then \_\_\_\_\_ pianos left with you?
- 4) There are 47 bugles. Sam gave 25 more bugles. Then \_\_\_\_\_ numbers of bugles are there?
- 5) What is the difference in the count between guitar and flute?  
\_\_\_\_\_
- 6) Which instrument counts to 39?  






<input type="radio"/> Bugle	<input type="radio"/> Piano
<input type="radio"/> Guitar	<input type="radio"/> Drum

### Tally Chart

Name: \_\_\_\_\_






Date:\_\_\_\_\_

**A School took a survey on the number of musical instrument brought by the students and recorded the data. Answer the questions using tally chart.**

Music	Tally Marks
	
	
	
	
	

**Fill the blanks using tally chart:**

1)

				
26	47	39	66	59

2) There are 40 drums than flutes?

3) If there are 39 pianos and your friend had taking 19 pianos. Then 20 pianos left with you?

4) There are 47 bugles. Sam gave 25 more bugles. Then 72 numbers of bugles are there?

5) What is the difference in the count between guitar and flute?

---

33

6) Which instrument counts to 39?

○ Bugle

- Piano

○ Guitar

○ Drum