


Tally Chart

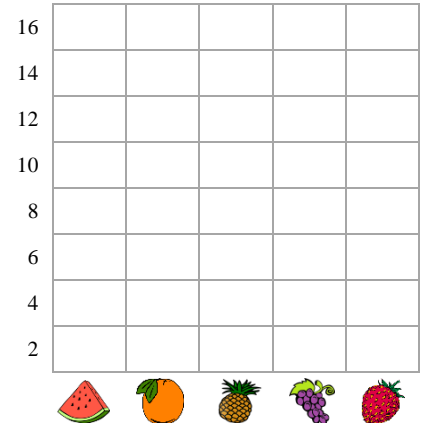
Name: _____

Date: _____

Mr. Benn counted how many of each type of fruits that grow in the garden. Make the tally chart and write the number and draw the bar graph to answer the questions.



Types of fruits	Tally marks	Numbers
watermelon		
orange		
pineapple		
grapes		
strawberry		



- 48 fruits are there in the garden. If 12 fruits are spoiled, how many fruits are left in the garden?

- If a garden has 48 fruits. How many fruits do two gardens have?

- If 16 more fruits are there in the garden, what will be the total number of fruits?

- If Mr. Benn found 8 more strawberries then what will be the total count of strawberries?


- Mr. Benn gave 14 oranges, if he gives you 4 more, but your friend eats one of them, how many oranges do you have left?

Tally Chart

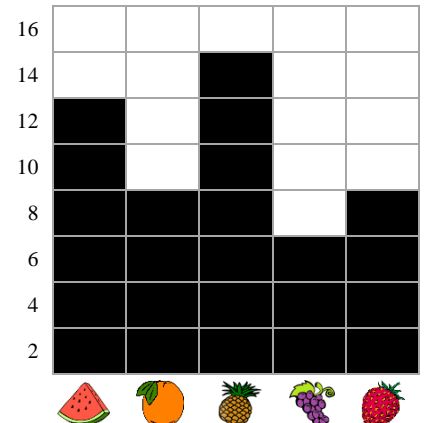
Name: _____

Date: _____

Mr. Benn counted how many of each type of fruits that grow in the garden. Make the tally chart and write the number and draw the bar graph to answer the questions.



Types of fruits	Tally marks	Numbers
watermelon		12
orange		8
pineapple		14
grapes		6
strawberry		8



- 48 fruits are there in the garden. If 12 fruits are spoiled, how many fruits are left in the garden?
36
- If a garden has 48 fruits. How many fruits do two gardens have?
96
- If 16 more fruits are there in the garden, what will be the total number of fruits?
64
- If Mr. Benn found 8 more strawberries then what will be the total count of strawberries?
16
- Mr. Benn gave 14 oranges, if he gives you 4 more, but your friend eats one of them, how many oranges do you have left?
17