






Tally Chart


Name: _____

Date: _____

In a community people grow few plants and trees and recorded the information of trees, plants, buds, flowers and fruits that grow in the community. Make the tally chart and write the number to answer the questions.



	Tally marks	Numbers
 tree		
 flower		
 fruits		
 buds		
 plant		



1) How many plants and trees are there in the community?

2) How many more fruits are there than flowers?

3) Which two are equal in number?

4) What is the difference in the number of buds and flowers?

5) Which counts more than 10?






Tally Chart

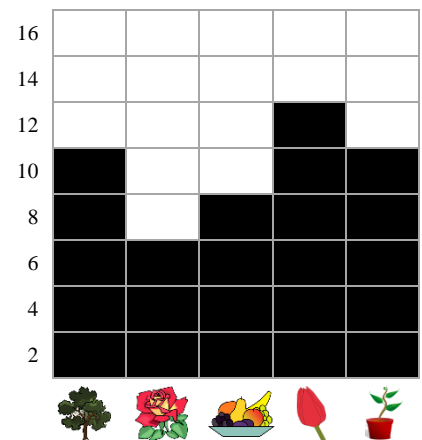
Name: _____

Date: _____

In a community people grow few plants and trees and recorded the information of trees, plants, buds, flowers and fruits that grow in the community. Make the tally chart and write the number to answer the questions.



		Tally marks	Numbers
	tree		10
	flower		6
	fruits		8
	buds		12
	plant		10



1) How many plants and trees are there in the community?

20

2) How many more fruits are there than flowers?

2

3) Which two are equal in number?

Trees and Plants

4) What is the difference in the number of buds and flowers?

6

5) Which counts more than 10?

Buds