










# Sports Tally Chart

Name: \_\_\_\_\_

Date: \_\_\_\_\_

**A School took a survey among the students on their favorite sport and recorded the data. Use tally chart to represent the data and answer the questions.**

Basket Ball	Base Ball	Volley Ball	Rugby Ball	Soccer Ball
				
<b>45</b>	<b>30</b>	<b>50</b>	<b>35</b>	<b>40</b>

Sports	Tally Chart
	
	
	
	
	






- 1) Which is the most favorite sport? \_\_\_\_\_
- 2) How many more students liked basketball than baseball? \_\_\_\_\_
- 3) How many students are there altogether? \_\_\_\_\_
- 4) Which sport is least liked by students? \_\_\_\_\_






# Sports Tally Chart

Name: \_\_\_\_\_

Date: \_\_\_\_\_

**A School took a survey among the students on their favorite sport and recorded the data. Use tally chart to represent the data and answer the questions.**

Basket Ball	Base Ball	Volley Ball	Rugby Ball	Soccer Ball
				
<b>45</b>	<b>30</b>	<b>50</b>	<b>35</b>	<b>40</b>

Sports	Tally Chart
	/    /    /    /    /    /    /    /    /
	/    /    /    /    /    /
	/    /    /    /    /    /    /    /    /    /
	/    /    /    /    /    /    /
	/    /    /    /    /    /    /    /

- |   |             |
|---|-------------|
| 1) Which is the most favorite sport?                      | Volley Ball |
| 2) How many more students liked basketball than baseball? | 15          |
| 3) How many students are there altogether?                | 200         |
| 4) Which sport is least liked by students?                | Base Ball   |