





Name: \_\_\_\_\_

Date: \_\_\_\_\_

## Estimate

Estimate the height of the bananas and measure the actual value with a ruler.



Estimate: 5.6 cm

Estimate:

Estimate:

Estimate:

Estimate:

Actual: 7.5 cm

Actual:


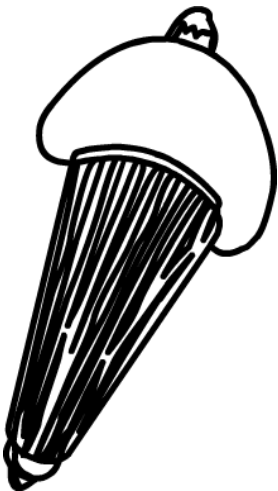
Actual:

Actual:

Actual:

Shortest to tallest order. \_\_\_\_\_

Estimate the height of the ice creams and measure the actual value with a ruler.



Estimate:

Estimate:

Estimate:

Estimate:

Estimate:

Actual:

Actual:

Actual:

Actual:

Actual:





Shortest to tallest order. \_\_\_\_\_

Name: \_\_\_\_\_

Date: \_\_\_\_\_

## Estimate

Estimate the height of the bananas and measure the actual value with a ruler.



Estimate:	5.6 cm
-----------	--------

Estimate:	4.1 cm
-----------	--------

Estimate:	5.5 cm
-----------	--------

Estimate:	4 cm
-----------	------

Estimate:	9 cm
-----------	------

Actual:	7.5 cm
---------	--------

Actual:	4.3 cm
---------	--------



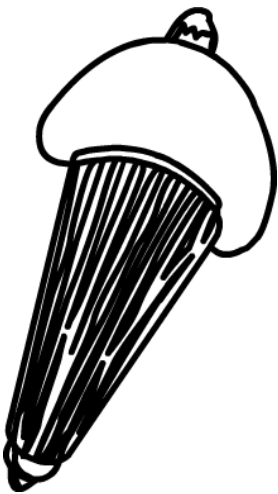
Actual:	6.3 cm
---------	--------

Actual:	3.6 cm
---------	--------

Actual:	8.1 cm
---------	--------

Shortest to tallest order. 3.6, 4.3, 6.3, 7.5, 8.1

Estimate the height of the ice creams and measure the actual value with a ruler.



Estimate:	5.3 cm
-----------	--------

Estimate:	1.9 cm
-----------	--------

Estimate:	4 cm
-----------	------

Estimate:	5 cm
-----------	------

Estimate:	3 cm
-----------	------

Actual:	6.4 cm
---------	--------

Actual:	2.1 cm
---------	--------

Actual:	4.5 cm
---------	--------

Actual:	5 cm
---------	------

Actual:	3.6 cm
---------	--------

Shortest to tallest order. 2.1, 3.6, 4.5, 5, 6.4