


Name: _____

Date: _____

Estimate

Estimate the height of the violins and measure the actual value with a ruler.



Estimate:	
-----------	--

Estimate:	
-----------	--

Estimate:	
-----------	--

Estimate:	
-----------	--

Estimate:	
-----------	--

Actual:	
---------	--

Actual:	
---------	--






Actual:	
---------	--

Actual:	
---------	--

Actual:	
---------	--

Shortest to tallest order. _____

Estimate the height of the flowers and measure the actual value with a ruler.



Estimate:	
-----------	--

Estimate:	
-----------	--

Estimate:	
-----------	--

Estimate:	
-----------	--

Estimate:	
-----------	--

Actual:	
---------	--

Actual:	
---------	--

Actual:	
---------	--

Actual:	
---------	--

Actual:	
---------	--

Shortest to tallest order. _____

Name: _____

Date: _____

Estimate

Estimate the height of the violins and measure the actual value with a ruler.



Estimate:	7 cm
-----------	------

Estimate:	6.3 cm
-----------	--------

Estimate:	5 cm
-----------	------

Estimate:	6.8 cm
-----------	--------

Estimate:	3.5 cm
-----------	--------

Actual:	6.7 cm
---------	--------

Actual:	5.9 cm
---------	--------






Actual:	4.3 cm
---------	--------

Actual:	6.5 cm
---------	--------

Actual:	3.5 cm
---------	--------

Shortest to tallest order. 3.5, 4.3, 5.9, 6.5, 6.7

Estimate the height of the flowers and measure the actual value with a ruler.



Estimate:	6.2 cm
-----------	--------

Estimate:	2.4 cm
-----------	--------

Estimate:	5.2 cm
-----------	--------

Estimate:	5 cm
-----------	------

Estimate:	2 cm
-----------	------

Actual:	5.3 cm
---------	--------

Actual:	3 cm
---------	------

Actual:	4.1 cm
---------	--------

Actual:	3.7 cm
---------	--------

Actual:	1.7 cm
---------	--------

Shortest to tallest order. 1.7, 3, 3.7, 4.1, 5.3