

Prime Factor Tree

Name: _____

Date: _____

Draw a prime factor tree.

1) 18

2) 27

3) 36

4) 44

5) 26

6) 54

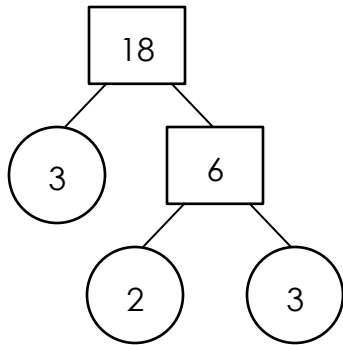
Prime Factor Tree

Name: _____

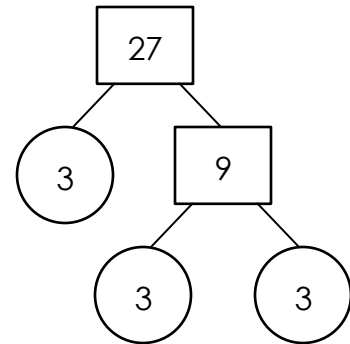
Date: _____

Draw a prime factor tree.

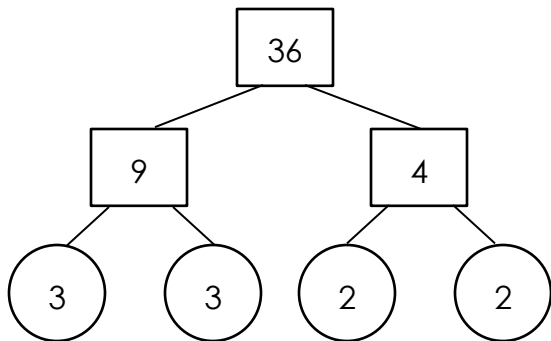
1) 18



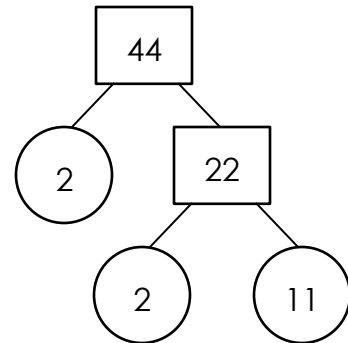
2) 27



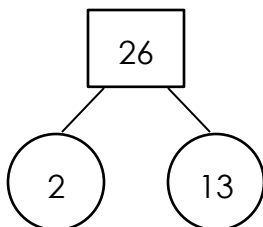
3) 36



4) 44



5) 26



6) 54

