

Venn Diagram

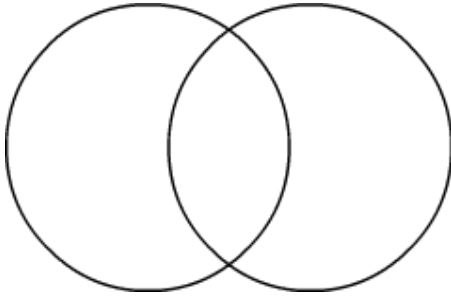
Name: _____

Date: _____

Find the greatest common factor.

1) 12, 18.

Factors of 12 Factors of 18

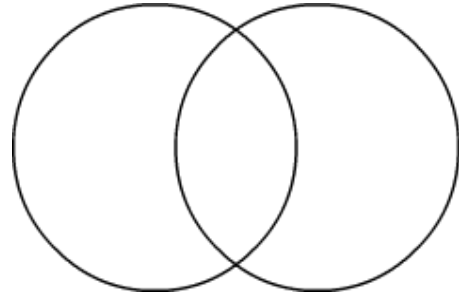


Common Factors are: _____

GCF: _____

2) 24, 36.

Factors of 24 Factors of 36

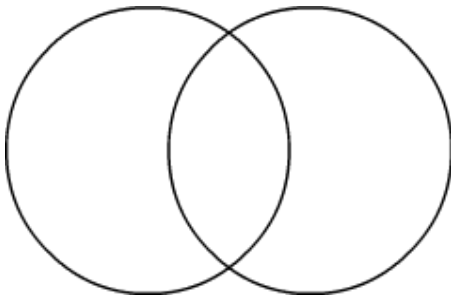


Common Factors are: _____

GCF: _____

3) 55, 40.

Factors of 55 Factors of 40

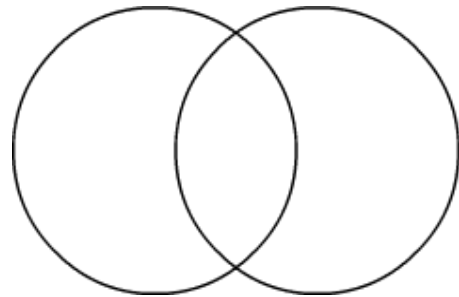


Common Factors are: _____

GCF: _____

4) 14, 42.

Factors of 14 Factors of 42

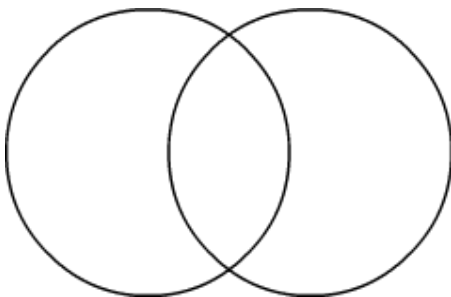


Common Factors are: _____

GCF: _____

5) 65, 95.

Factors of 65 Factors of 95

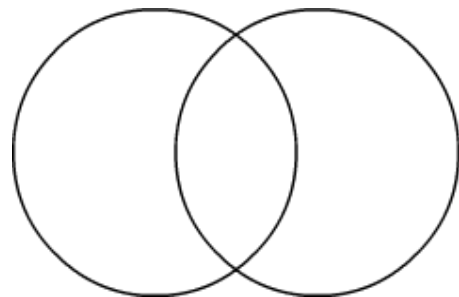


Common Factors are: _____

GCF: _____

6) 23, 46.

Factors of 23 Factors of 46



Common Factors are: _____

GCF: _____

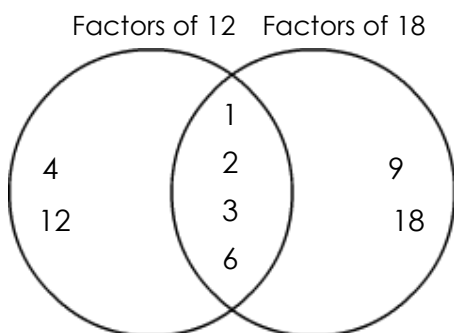
Venn Diagram

Name: _____

Date: _____

Find the greatest common factor.

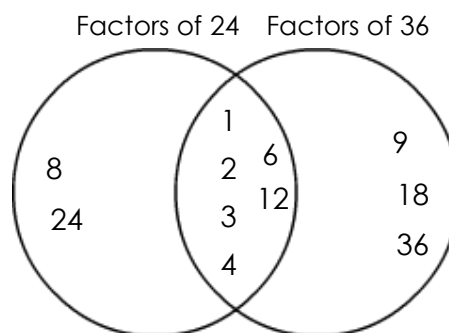
1) 12, 18.



Common Factors are: 1, 2, 3, 6

GCF: 6

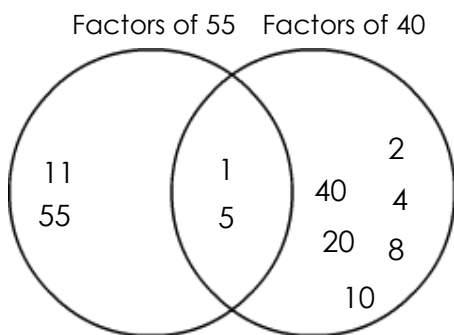
2) 24, 36.



Common Factors are: 1, 2, 3, 4, 6, 12

GCF: 12

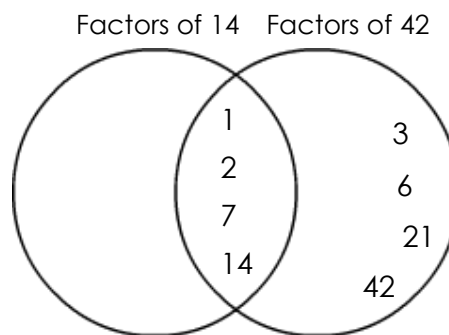
3) 55, 40.



Common Factors are: 1, 5

GCF: 5

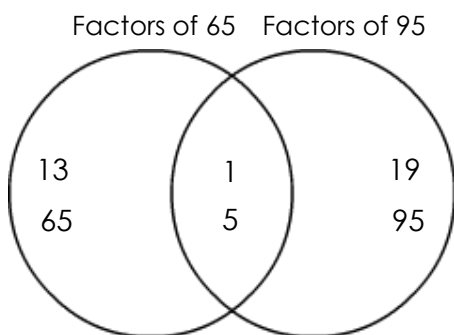
4) 14, 42.



Common Factors are: 1, 2, 7, 14

GCF: 14

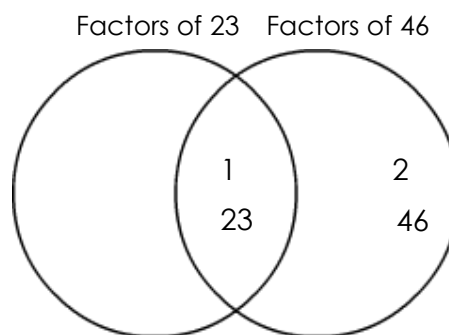
5) 65, 95.



Common Factors are: 1, 5

GCF: 5

6) 23, 46.



Common Factors are: 1, 23

GCF: 23