

Venn Diagram

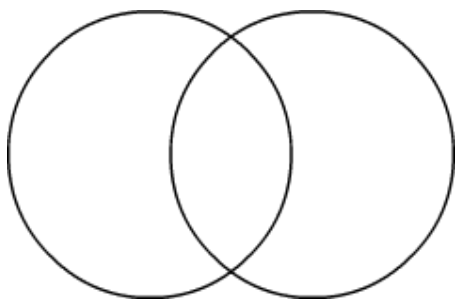
Name: _____

Date: _____

Find the greatest common factor.

1) 12, 15.

Factors of 12 Factors of 15

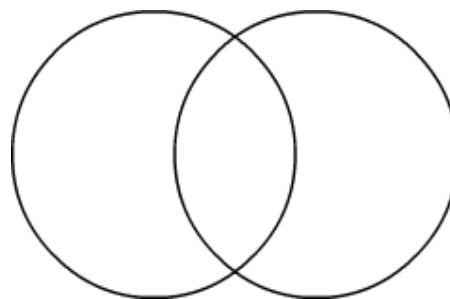


Common Factors are: _____

GCF: _____

2) 24, 36.

Factors of 24 Factors of 36

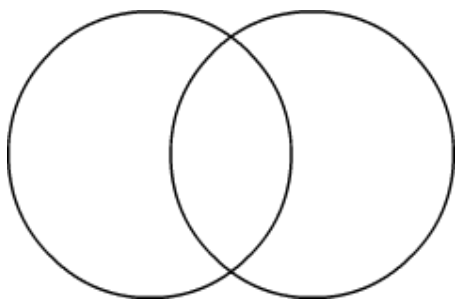


Common Factors are: _____

GCF: _____

3) 48, 64.

Factors of 48 Factors of 64

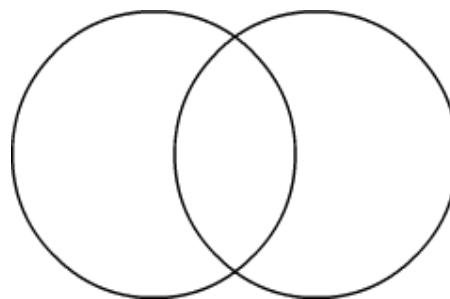


Common Factors are: _____

GCF: _____

4) 60, 72.

Factors of 60 Factors of 72

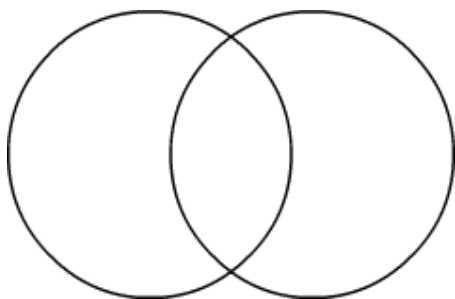


Common Factors are: _____

GCF: _____

5) 16, 50.

Factors of 16 Factors of 50

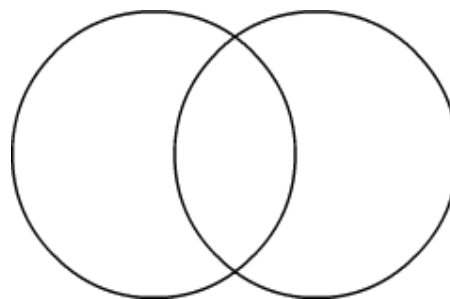


Common Factors are: _____

GCF: _____

6) 28, 70.

Factors of 28 Factors of 70



Common Factors are: _____

GCF: _____

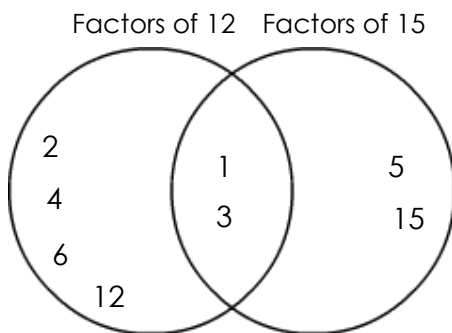
Venn Diagram

Name: _____

Date: _____

Find the greatest common factor.

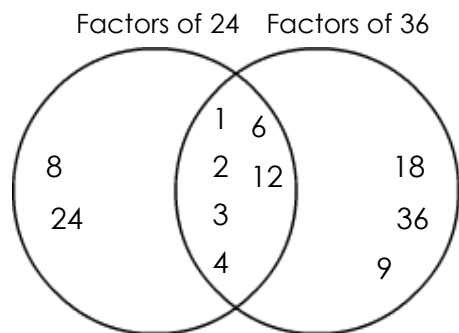
1) 12, 15.



Common Factors are: 1, 3

GCF: 3

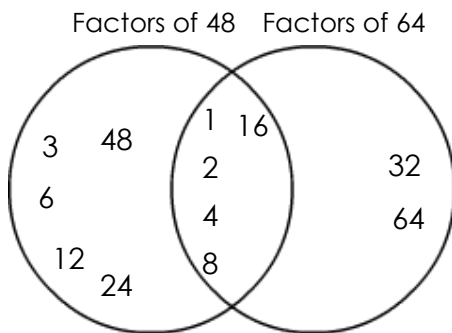
2) 24, 36.



Common Factors are: 1, 2, 3, 4, 6, 12

GCF: 12

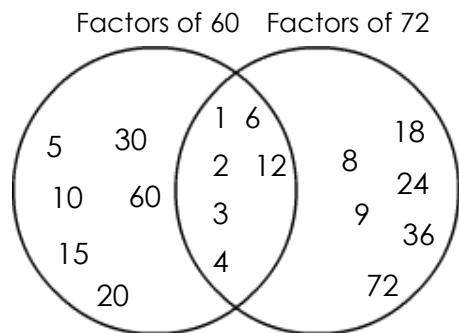
3) 48, 64.



Common Factors are: 1, 2, 4, 8, 16

GCF: 16

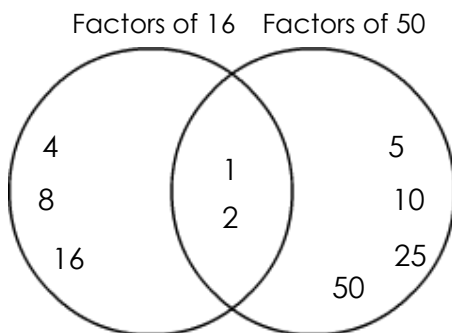
4) 60, 72.



Common Factors are: 1, 2, 3, 4, 6, 12

GCF: 12

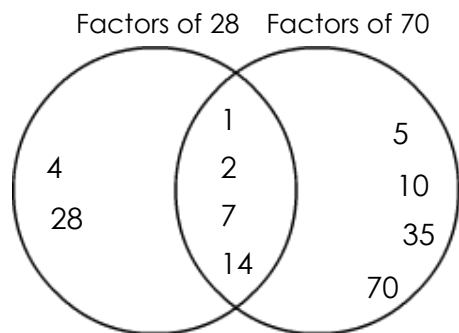
5) 16, 50.



Common Factors are: 1, 2

GCF: 2

6) 28, 70.



Common Factors are: 1, 2, 7, 14

GCF: 14