

Venn Diagram

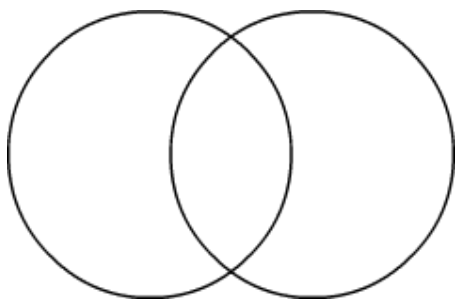
Name: _____

Date: _____

Find the greatest common factor.

1) 24, 60.

Factors of 24 Factors of 60

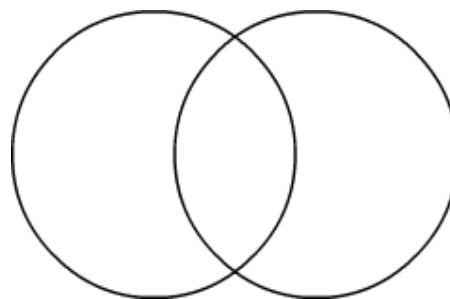


Common Factors are: _____

GCF: _____

2) 28, 98.

Factors of 28 Factors of 98

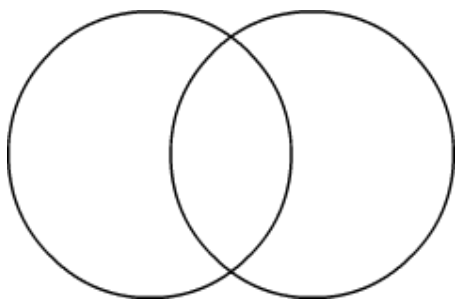


Common Factors are: _____

GCF: _____

3) 36, 48.

Factors of 36 Factors of 48

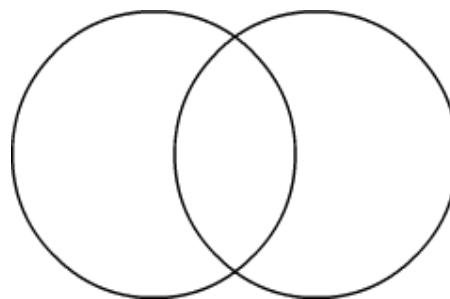


Common Factors are: _____

GCF: _____

4) 12, 30.

Factors of 12 Factors of 30

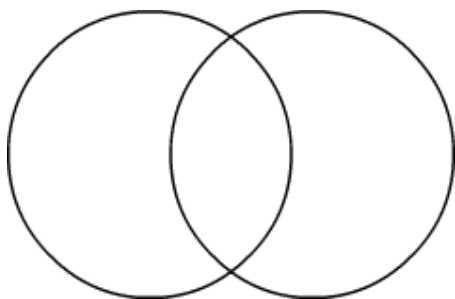


Common Factors are: _____

GCF: _____

5) 14, 21.

Factors of 14 Factors of 21

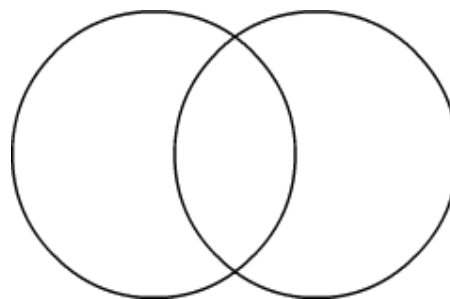


Common Factors are: _____

GCF: _____

6) 22, 24.

Factors of 22 Factors of 24



Common Factors are: _____

GCF: _____

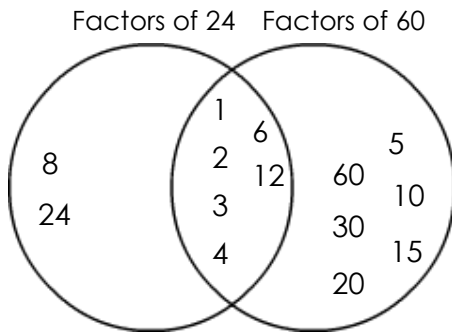
Venn Diagram

Name: _____

Date: _____

Find the greatest common factor.

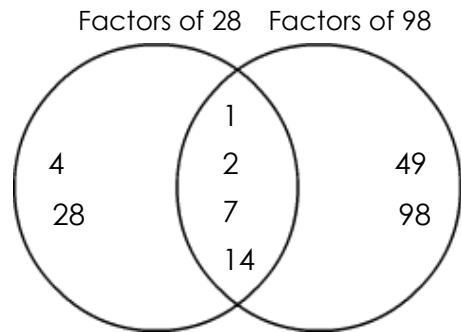
1) 24, 60.



Common Factors are: 1, 2, 3, 4, 6, 12

GCF: 12

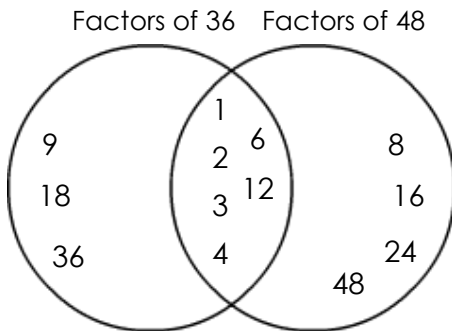
2) 28, 98.



Common Factors are: 1, 2, 7, 14

GCF: 14

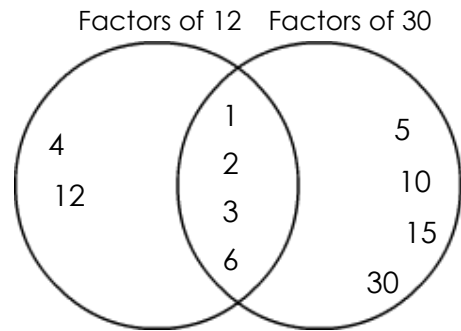
3) 36, 48.



Common Factors are: 1, 2, 3, 4, 6, 12

GCF: 12

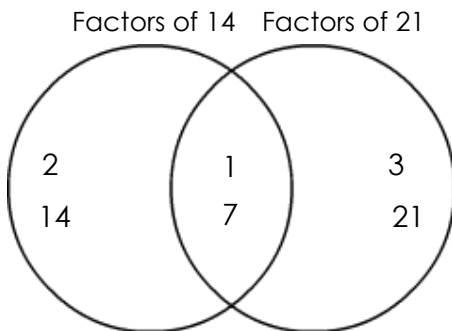
4) 12, 30.



Common Factors are: 1, 2, 3, 6

GCF: 6

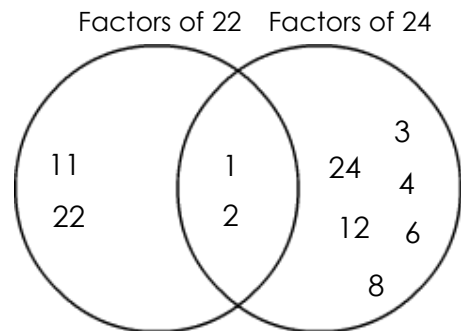
5) 14, 21.



Common Factors are: 1, 7

GCF: 7

6) 22, 24.



Common Factors are: 1, 2

GCF: 2