

Venn Diagram

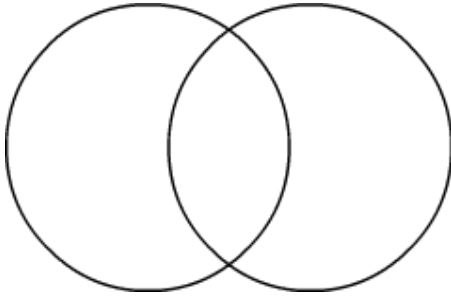
Name: _____

Date: _____

Find the greatest common factor.

1) 12, 20.

Factors of 12 Factors of 20

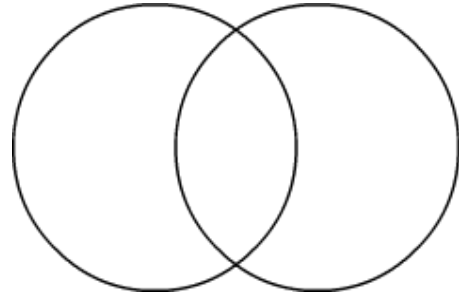


Common Factors are: _____

GCF: _____

2) 18, 42.

Factors of 18 Factors of 42

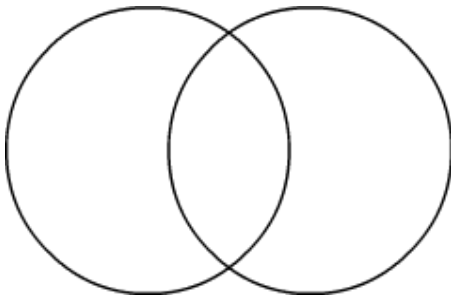


Common Factors are: _____

GCF: _____

3) 21, 24.

Factors of 21 Factors of 24

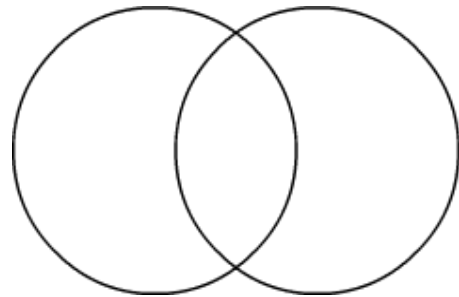


Common Factors are: _____

GCF: _____

4) 36, 60.

Factors of 36 Factors of 60

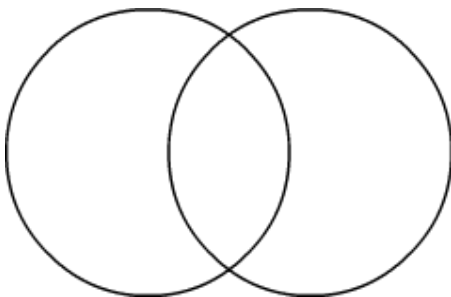


Common Factors are: _____

GCF: _____

5) 64, 80.

Factors of 64 Factors of 80

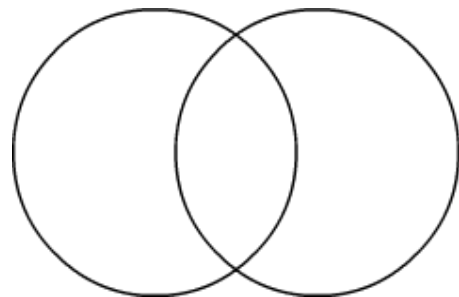


Common Factors are: _____

GCF: _____

6) 48, 56.

Factors of 48 Factors of 56



Common Factors are: _____

GCF: _____

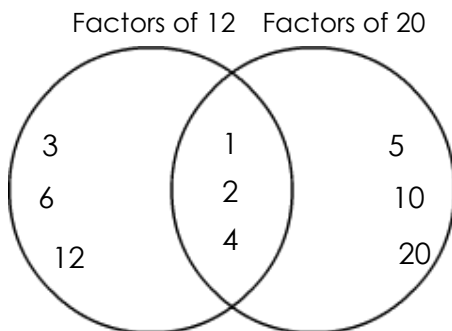
Venn Diagram

Name: _____

Date: _____

Find the greatest common factor.

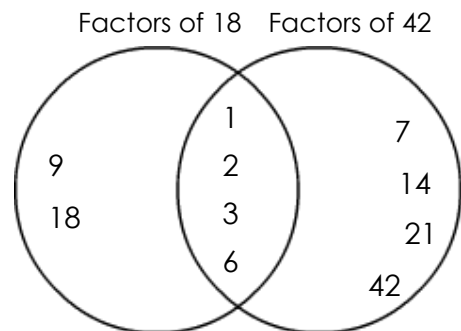
1) 12, 20.



Common Factors are: 1, 2, 4

GCF: 4

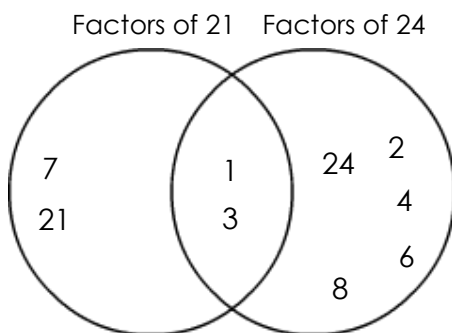
2) 18, 42.



Common Factors are: 1, 2, 3, 6

GCF: 6

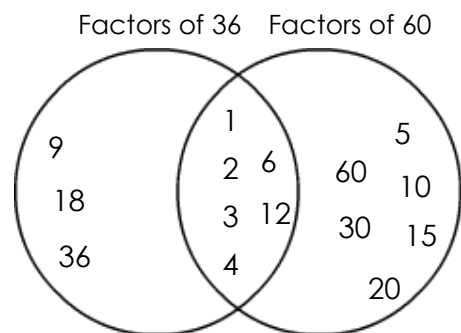
3) 21, 24.



Common Factors are: 1, 3

GCF: 3

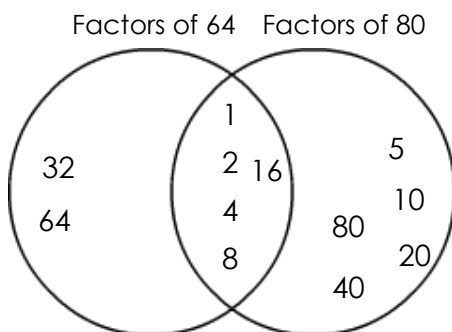
4) 36, 60.



Common Factors are: 1, 2, 3, 4, 6, 12

GCF: 12

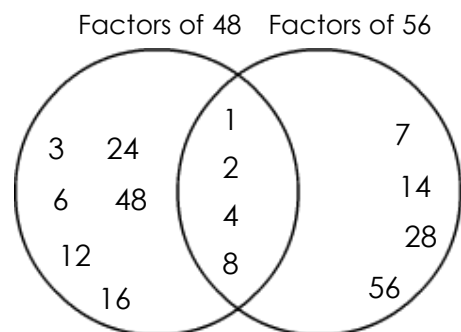
5) 64, 80.



Common Factors are: 1, 2, 4, 8, 16

GCF: 16

6) 48, 56.



Common Factors are: 1, 2, 4, 8

GCF: 8