

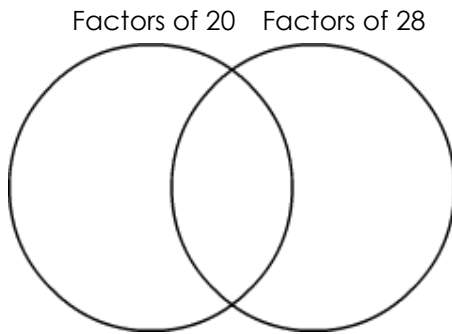
Venn Diagram

Name: _____

Date: _____

Find the highest common factor and lowest common multiple

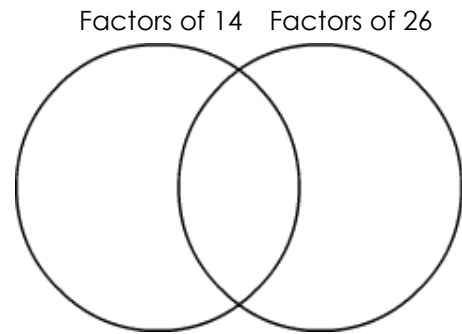
1) 20, 28.



Common Factors are: _____

HCF: _____ LCM: _____

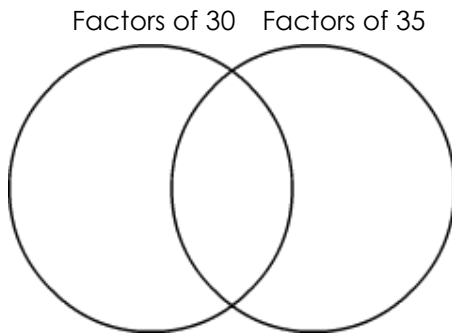
2) 14, 26.



Common Factors are: _____

HCF: _____ LCM: _____

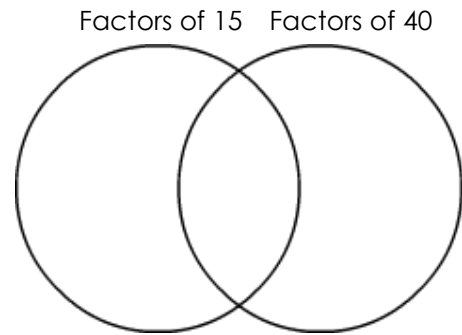
3) 30, 35.



Common Factors are: _____

HCF: _____ LCM: _____

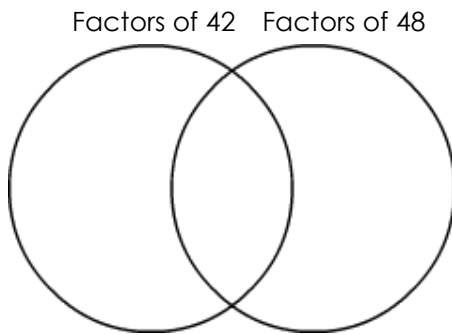
4) 15, 40.



Common Factors are: _____

HCF: _____ LCM: _____

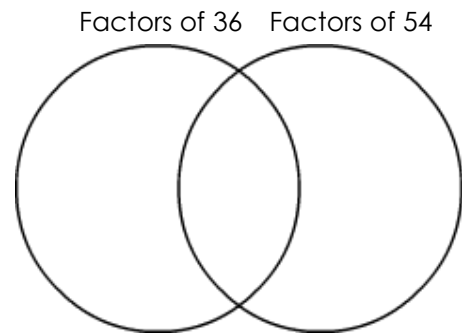
5) 42, 48.



Common Factors are: _____

HCF: _____ LCM: _____

6) 36, 54.



Common Factors are: _____

HCF: _____ LCM: _____

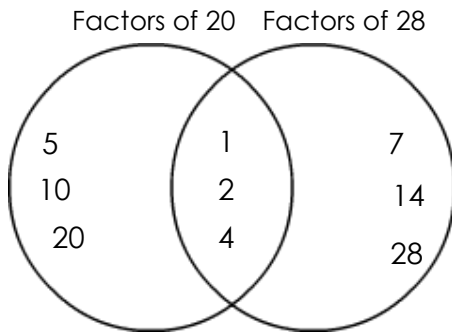
Venn Diagram

Name: _____

Date: _____

Find the highest common factor and lowest common multiple

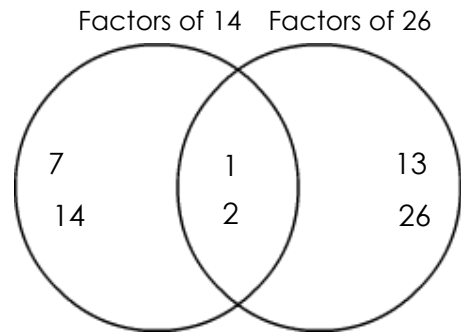
1) 20, 28.



Common Factors are: 1, 2, 4

HCF: 4 LCM: 140

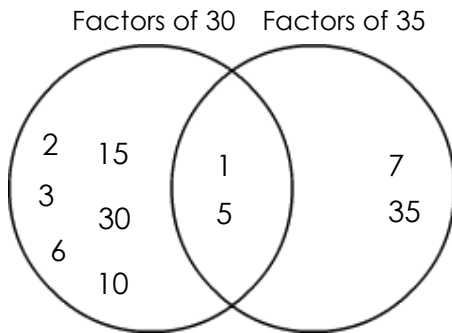
2) 14, 26.



Common Factors are: 1, 2

HCF: 2 LCM: 182

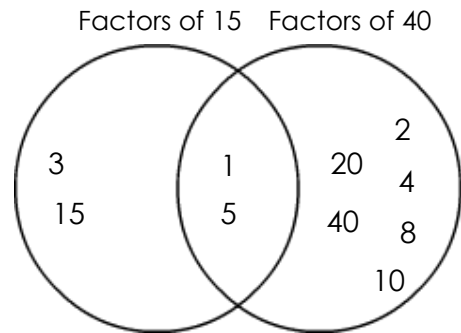
3) 30, 35.



Common Factors are: 1, 5

HCF: 5 LCM: 210

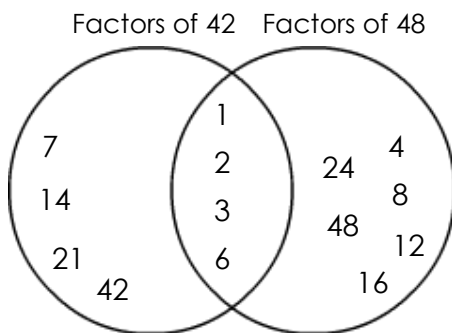
4) 15, 40.



Common Factors are: 1, 5

HCF: 5 LCM: 120

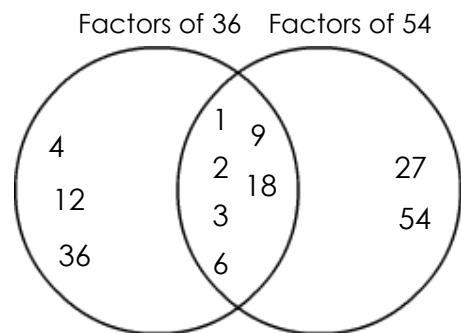
5) 42, 48.



Common Factors are: 1, 2, 3, 6

HCF: 6 LCM: 336

6) 36, 54.



Common Factors are: 1, 2, 3, 6, 9, 18

HCF: 18 LCM: 108