

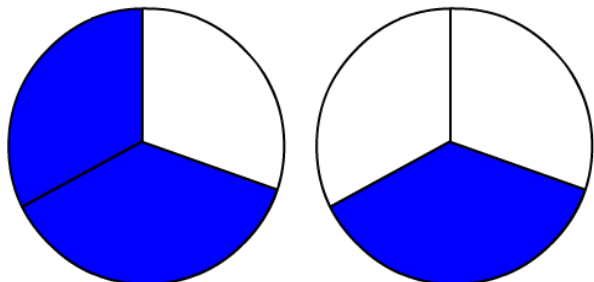
Name: \_\_\_\_\_

Date: \_\_\_\_\_

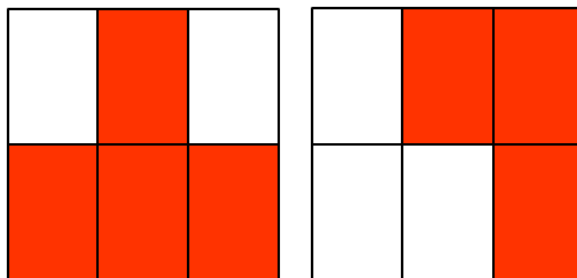
## Comparing Fractions

Write each fraction, then compare the fractions using  $<$ ,  $>$  or  $=$ .

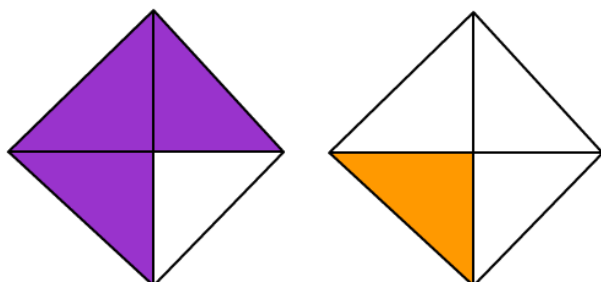
1.



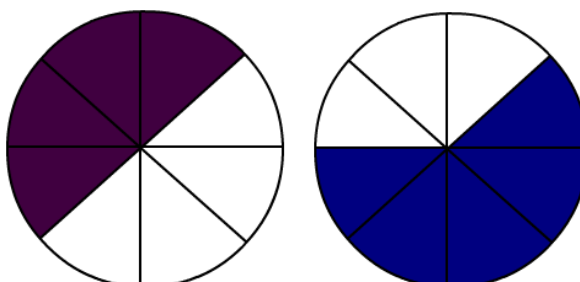
2.



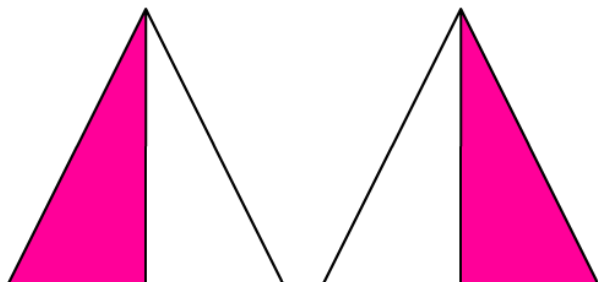
3.



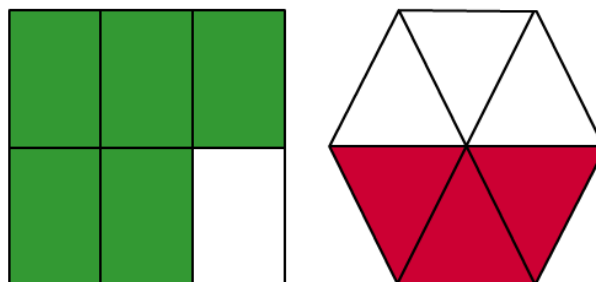
4.



5.



6.



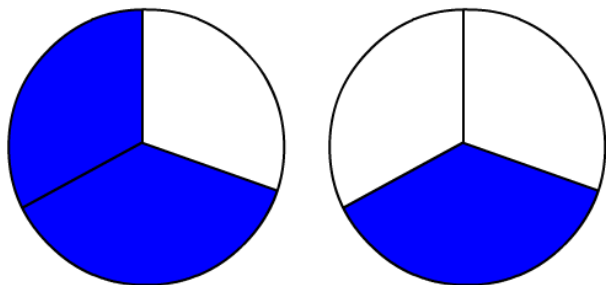
Name: \_\_\_\_\_

Date: \_\_\_\_\_

## Comparing Fractions

Write each fraction, then compare the fractions using  $<$ ,  $>$  or  $=$ .

1.

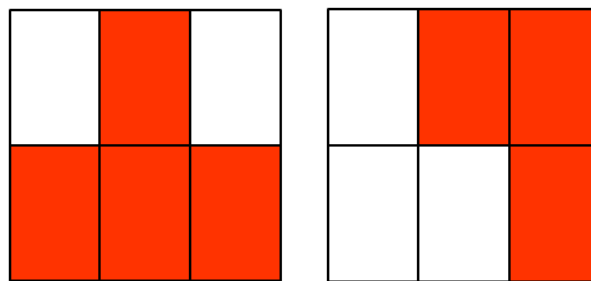


$$\frac{2}{3}$$

$>$

$$\frac{1}{3}$$

2.

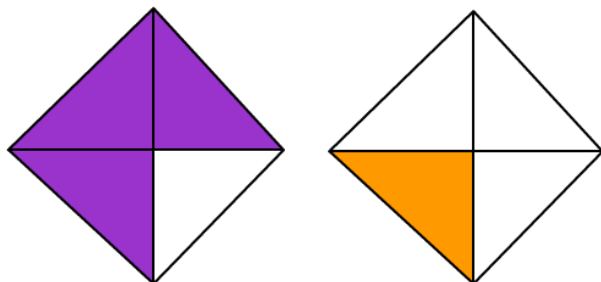


$$\frac{4}{6}$$

$>$

$$\frac{3}{6}$$

3.

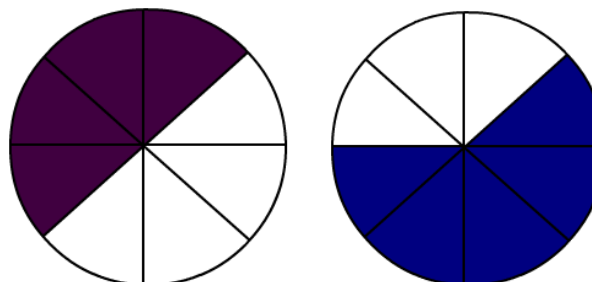


$$\frac{3}{4}$$

$>$

$$\frac{1}{4}$$

4.

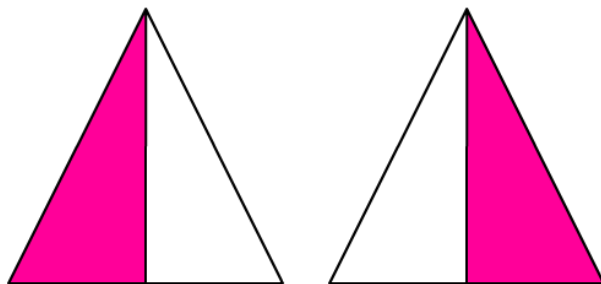


$$\frac{4}{8}$$

$<$

$$\frac{5}{8}$$

5.

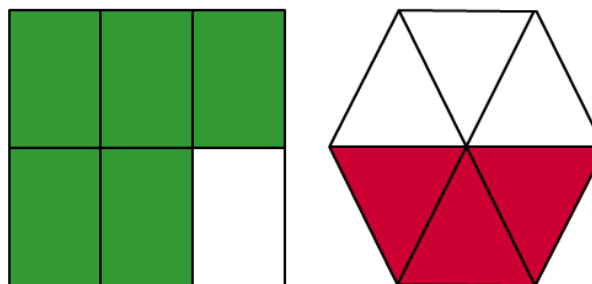


$$\frac{1}{2}$$

$=$

$$\frac{1}{2}$$

6.



$$\frac{5}{6}$$

$>$

$$\frac{3}{6}$$