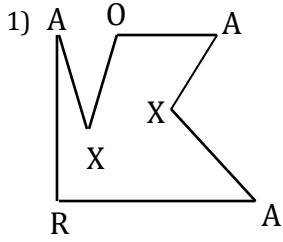


Types of Angles


Name: _____

Date: _____

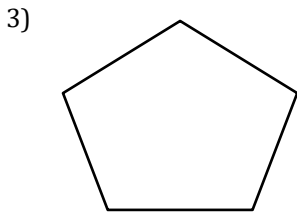
Acute, Obtuse, Right angle and Reflex.




A: 3 O: 1
R: 1 Ref: 2



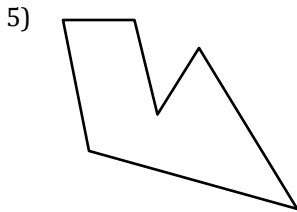
A: O:
R: Ref:



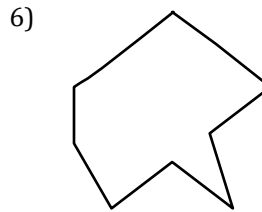
A: O:
R: Ref:



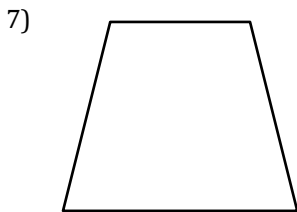
A: O:
R: Ref:



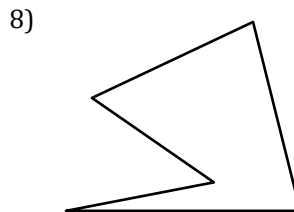
A: O:
R: Ref:



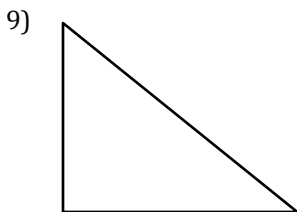
A: O:
R: Ref:



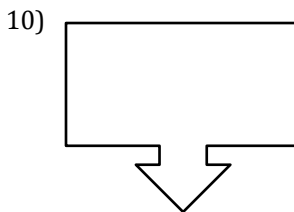
A: O:
R: Ref:



A: O:
R: Ref:



A: O:
R: Ref:



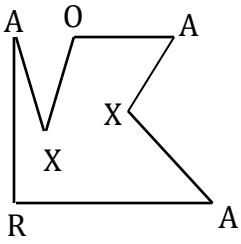
A: O:
R: Ref:

Types of Angles

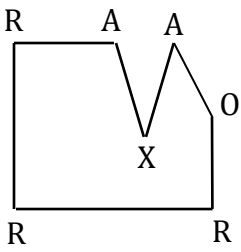
Name: _____

Date: _____

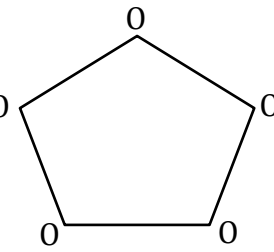
Acute, Obtuse, Right angle and Reflex.

1) 

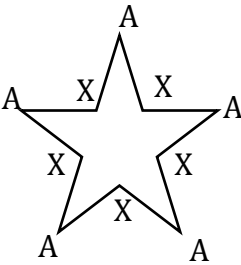
A: 3 O: 1
R: 1 Ref: 2

2) 

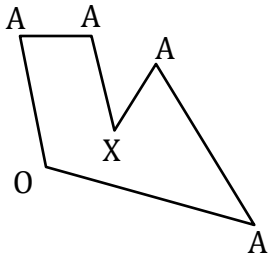
A: 2 O: 1
R: 3 Ref: 1

3) 

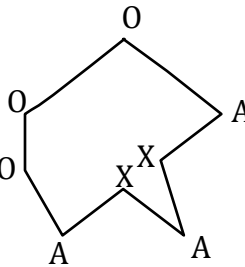
A: 0 O: 5
R: 0 Ref: 0

4) 

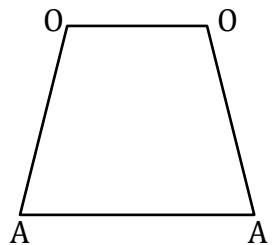
A: 5 O: 0
R: 0 Ref: 5

5) 

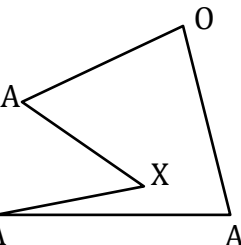
A: 4 O: 1
R: 0 Ref: 1

6) 

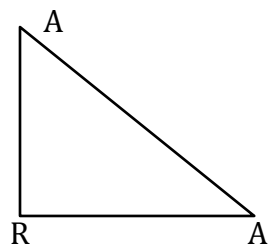
A: 3 O: 3
R: 0 Ref: 2

7) 

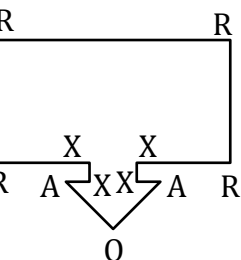
A: 2 O: 2
R: 0 Ref: 0

8) 

A: 3 O: 1
R: 0 Ref: 1

9) 

A: 2 O: 0
R: 1 Ref: 0

10) 

A: 2 O: 1
R: 4 Ref: 4