


Types of Angles

Name: _____

Date: _____

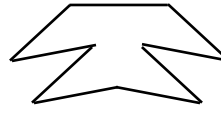
Acute, Obtuse, Right angle and Reflex.

1)



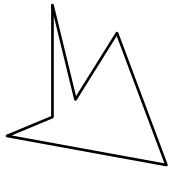
A: _____ O: _____
R: _____ Ref: _____

2)



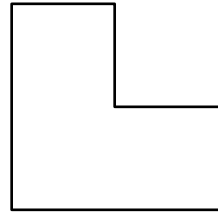
A: _____ O: _____
R: _____ Ref: _____

3)



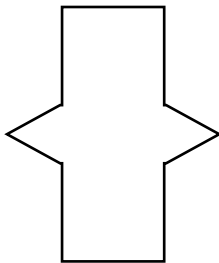
A: _____ O: _____
R: _____ Ref: _____

4)



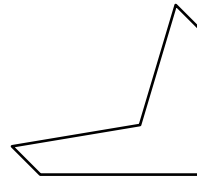
A: _____ O: _____
R: _____ Ref: _____

5)



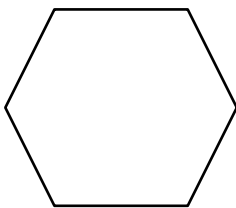
A: _____ O: _____
R: _____ Ref: _____

6)



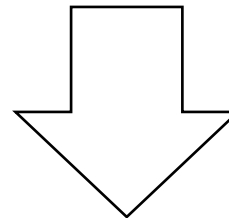
A: _____ O: _____
R: _____ Ref: _____

7)



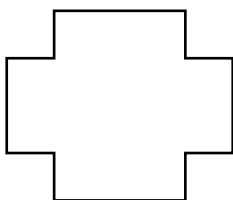
A: _____ O: _____
R: _____ Ref: _____

8)



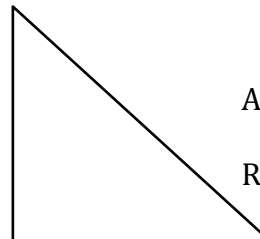
A: _____ O: _____
R: _____ Ref: _____

9)



A: _____ O: _____
R: _____ Ref: _____

10)



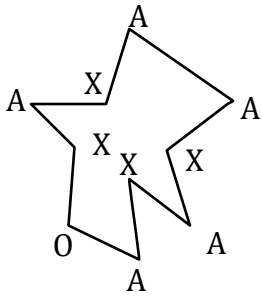
A: _____ O: _____
R: _____ Ref: _____

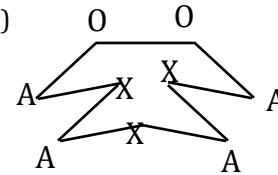
Types of Angles

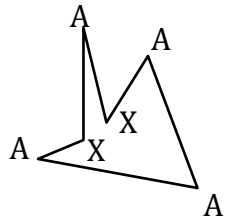
Name: _____

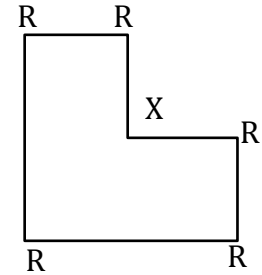
Date: _____

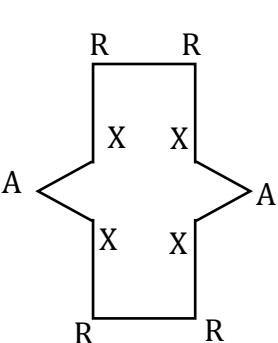
Acute, Obtuse, Right angle and Reflex.

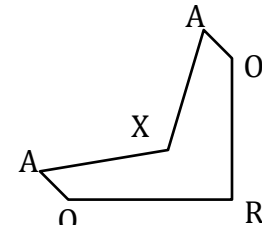
1)  A: 5 O: 1
R: 0 Ref: 4

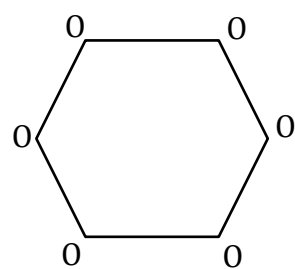
2)  A: 4 O: 2
R: 0 Ref: 3

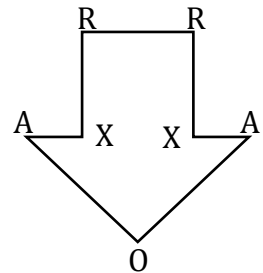
3)  A: 4 O: 0
R: 0 Ref: 2

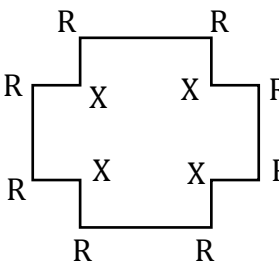
4)  A: 0 O: 0
R: 5 Ref: 1

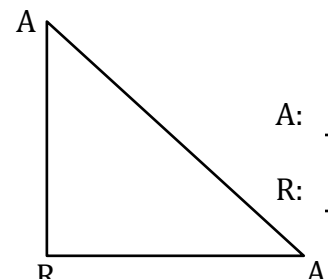
5)  A: 2 O: 0
R: 4 Ref: 4

6)  A: 2 O: 2
R: 1 Ref: 1

7)  A: 0 O: 6
R: 0 Ref: 0

8)  A: 2 O: 1
R: 2 Ref: 2

9)  A: 0 O: 0
R: 8 Ref: 4

10)  A: 2 O: 0
R: 1 Ref: 0