


Angles

Name: _____

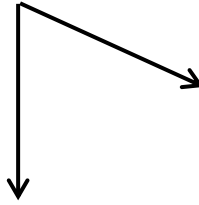
Date: _____

Determine whether the angles shown is less, more or equal to 90°

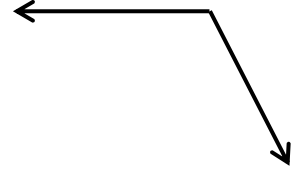
1)



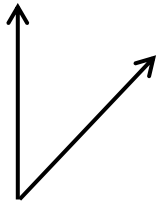
2)



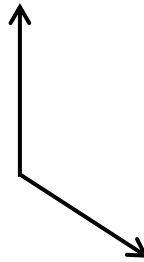
3)



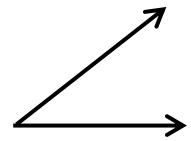
4)



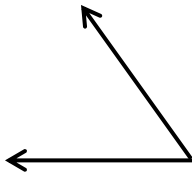
5)



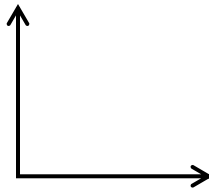
6)



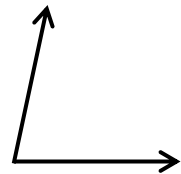
7)



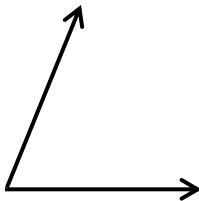
8)



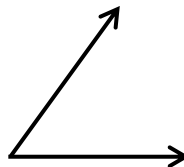
9)



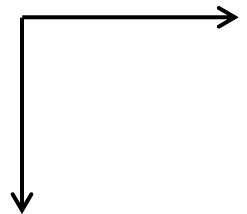
10)



11)



12)




Angles

Name: _____

Date: _____

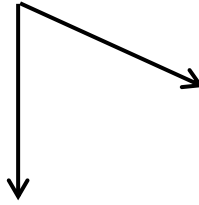
Determine whether the angles shown is less, more or equal to 90°

1)



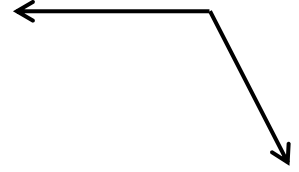
More

2)



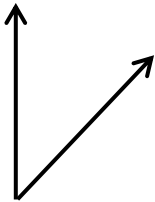
Less

3)



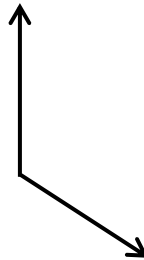
More

4)



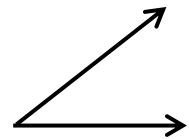
Less

5)



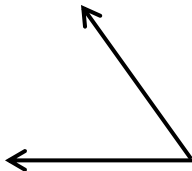
More

6)



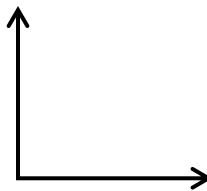
Less

7)



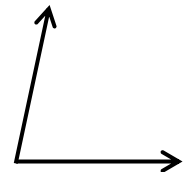
Less

8)



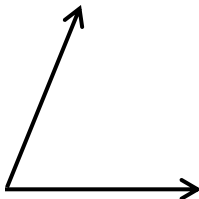
Equal

9)



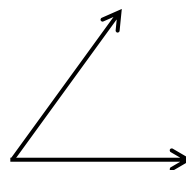
Less

10)



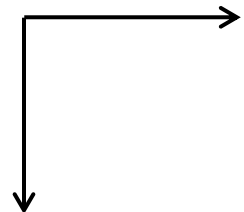
Less

11)



Less

12)



Equal