

Name: \_\_\_\_\_

Date: \_\_\_\_\_

Draw a minute hand in each clock according to the angle.

Angle:  $30^\circ$



Angle:  $120^\circ$




Angle:  $60^\circ$




Angle:  $150^\circ$




Angle:  $180^\circ$



Angle:  $90^\circ$




Angle:  $30^\circ$



Angle:  $150^\circ$



Angle:  $90^\circ$



Name: \_\_\_\_\_


Date: \_\_\_\_\_

Draw a minute hand in each clock according to the angle.

Angle:  $30^\circ$



Angle:  $120^\circ$




Angle:  $60^\circ$




Angle:  $150^\circ$



Angle:  $180^\circ$




Angle:  $90^\circ$



Angle:  $30^\circ$



Angle:  $150^\circ$



Angle:  $90^\circ$

