

Name: _____

Date: _____

Draw a minute hand in each clock according to the angle.

Angle: 135°



Angle: 45°



Angle: 160°



Angle: 105°



Angle: 165°



Angle: 15°




Angle: 45°



Angle: 15°



Angle: 70°




Name: _____


Date: _____

Draw a minute hand in each clock according to the angle.


Angle: 135°




Angle: 45°




Angle: 160°




Angle: 105°




Angle: 165°



Angle: 15°



Angle: 45°



Angle: 15°



Angle: 70°

