


Name: _____

Date: _____

Draw a minute hand in each clock according to the angle.

Angle: 65°




Angle: 5°



Angle: 70°




Angle: 145°



Angle: 85°



Angle: 155°



Angle: 155°



Angle: 95°



Angle: 25°



Name: _____

Date: _____

Draw a minute hand in each clock according to the angle.


Angle: 65°



Angle: 5°



Angle: 70°




Angle: 145°



Angle: 85°



Angle: 155°



Angle: 155°



Angle: 95°



Angle: 25°

