

Name: _____

Date: _____

Draw a minute hand in each clock according to the angle.

Angle: 100°




Angle: 65°




Angle: 110°




Angle: 180°



Angle: 90°



Angle: 30°



Angle: 170°



Angle: 15°



Angle: 105°



Name: _____

Date: _____

Draw a minute hand in each clock according to the angle.

Angle: 100°




Angle: 65°




Angle: 110°




Angle: 180°




Angle: 90°



Angle: 30°



Angle: 170°



Angle: 15°



Angle: 105°

