

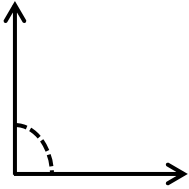
# Estimating Angles

Name: \_\_\_\_\_

Date: \_\_\_\_\_

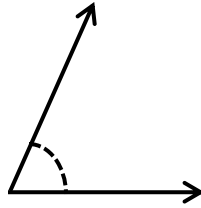
Choose the correct choice that best estimates the measure of each angle.

1)



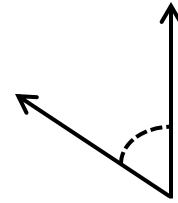
- 90°    120°  
 30°    150°

2)



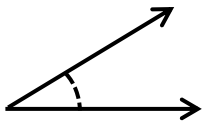
- 90°    140°  
 20°    70°

3)



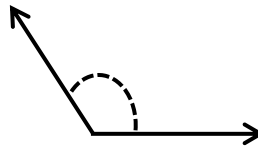
- 100°    40°  
 110°    80°

4)



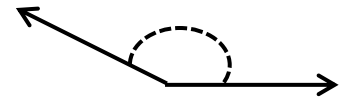
- 150°    90°  
 30°    160°

5)



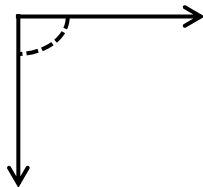
- 110°    160°  
 20°    80°

6)



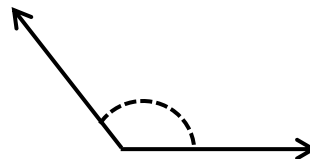
- 180°    120°  
 45°    145°

7)



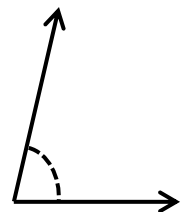
- 110°    140°  
 90°    40°

8)



- 90°    125°  
 85°    45°

9)



- 80°    30°  
 170°    130°

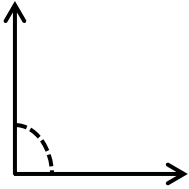
# Estimating Angles

Name: \_\_\_\_\_

Date: \_\_\_\_\_

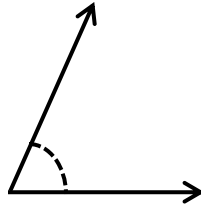
Choose the correct choice that best estimates the measure of each angle.

1)



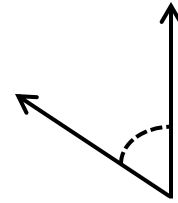
- 90°    120°  
 30°    150°

2)



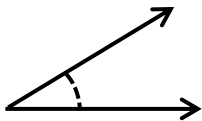
- 90°    140°  
 20°    70°

3)



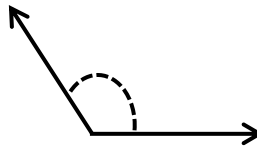
- 100°    40°  
 110°    80°

4)



- 150°    90°  
 30°    160°

5)



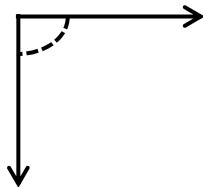
- 110°    160°  
 20°    80°

6)



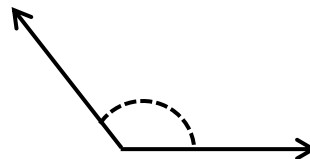
- 180°    120°  
 45°    145°

7)



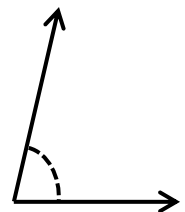
- 110°    140°  
 90°    40°

8)



- 90°    125°  
 85°    45°

9)



- 80°    30°  
 170°    130°