

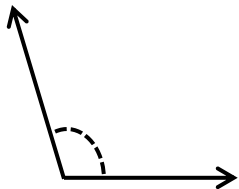
Estimating Angles

Name: _____

Date: _____

Choose the correct choice that best estimates the measure of each angle.

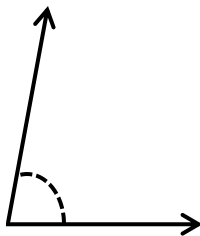
1)



60° 100°

90° 50°


2)



100° 50°

80° 10°

3)



135° 90°

105° 55°

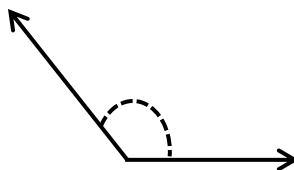
4)



160° 110°

180° 40°

5)



90° 45°

170° 135°

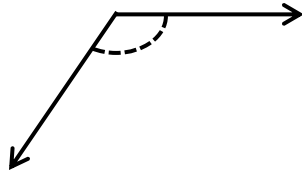
6)



170° 60°

115° 85°

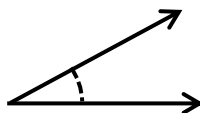
7)



190° 120°

80° 30°

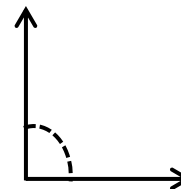
8)



30° 100°

75° 135°

9)



140° 50°

55° 90°

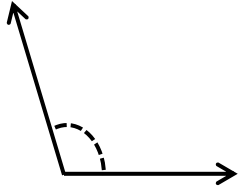
Estimating Angles

Name: _____

Date: _____

Choose the correct choice that best estimates the measure of each angle.

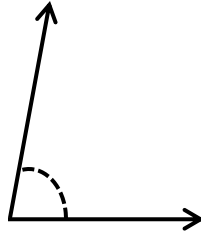
1)



60° 100°

90° 50°

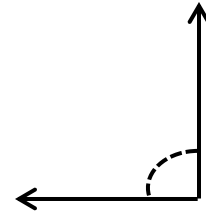
2)



100° 50°

80° 10°

3)



135° 90°

105° 55°

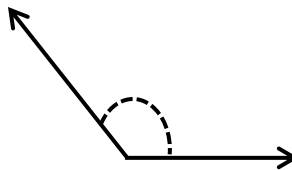
4)



160° 110°

180° 40°

5)



90° 45°

170° 135°

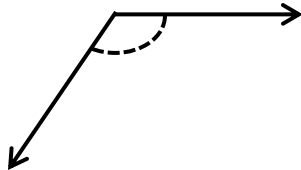
6)



170° 60°

115° 85°

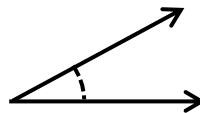
7)



190° 120°

80° 30°

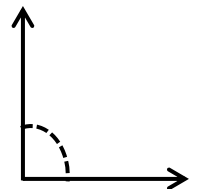
8)



30° 100°

75° 135°

9)



140° 50°

55° 90°