

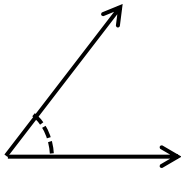
# Estimating Angles

Name: \_\_\_\_\_

Date: \_\_\_\_\_

Choose the correct choice that best estimates the measure of each angle.

1)



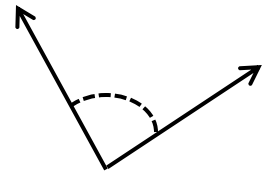
- 95°     125°  
 45°     165°

2)



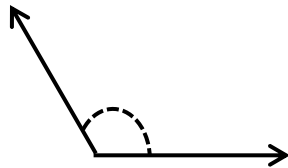
- 35°     10°  
 105°     110°

3)



- 85°     130°  
 125°     145°

4)



- 80°     65°  
 110°     145°

5)



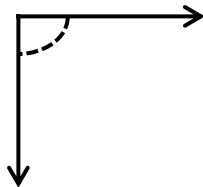
- 90°     180°  
 110°     70°

6)



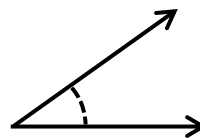
- 100°     10°  
 175°     80°

7)



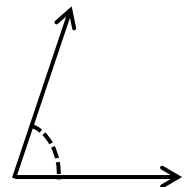
- 90°     120°  
 180°     60°

8)



- 150°     20°  
 90°     40°

9)



- 95°     75°  
 110°     160°

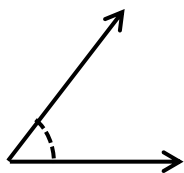
# Estimating Angles

Name: \_\_\_\_\_

Date: \_\_\_\_\_

Choose the correct choice that best estimates the measure of each angle.

1)



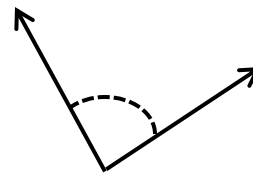
- 95°    125°  
 45°    165°

2)



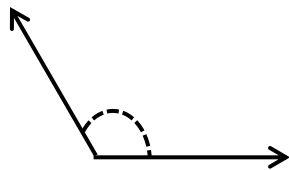
- 35°    10°  
 105°    110°

3)



- 85°    130°  
 125°    145°

4)



- 80°    65°  
 110°    145°

5)



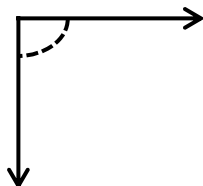
- 90°    180°  
 110°    70°

6)



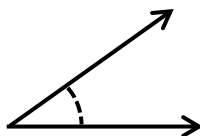
- 100°    10°  
 175°    80°

7)



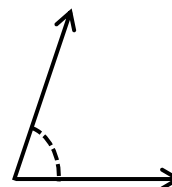
- 90°    120°  
 180°    60°

8)



- 150°    20°  
 90°    40°

9)



- 95°    75°  
 110°    160°