

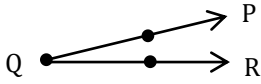
Estimating Angle

Name: _____

Date: _____

Solve each problem.

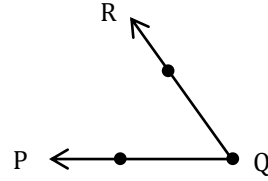
1)



Determine which choice best represents $\angle PQR$?

- a) 15° b) 58°
 c) 78° d) 40°

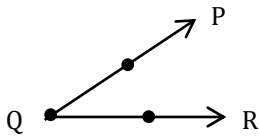
2)



Determine which choice best represents $\angle PQR$?

- a) 95° b) 69°
 c) 147° d) 120°

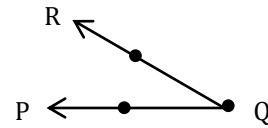
3)



Determine which choice best represents $\angle PQR$?

- a) 12° b) 42°
 c) 100° d) 123°

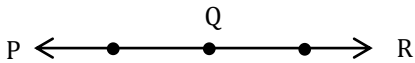
4)



Determine which choice best represents $\angle PQR$?

- a) 10° b) 63°
 c) 9° d) 32°

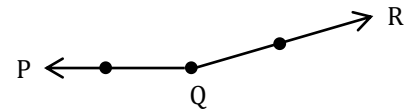
5)



Determine which choice best represents $\angle PQR$?

- a) 180° b) 72°
 c) 108° d) 111°

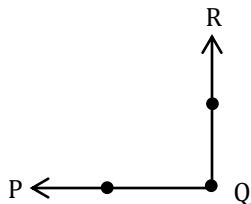
6)



Determine which choice best represents $\angle PQR$?

- a) 124° b) 112°
 c) 165° d) 180°

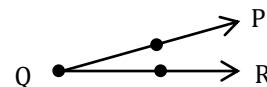
7)



Determine which choice best represents $\angle PQR$?

- a) 80° b) 45°
 c) 29° d) 90°

8)



Determine which choice best represents $\angle PQR$?

- a) 40° b) 18°
 c) 24° d) 10°

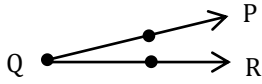
Estimating Angle

Name: _____

Date: _____

Solve each problem.

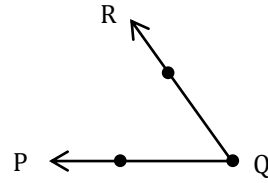
1)



Determine which choice best represents $\angle PQR$?

- a) 15° b) 58°
 c) 78° d) 40°

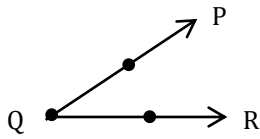
2)



Determine which choice best represents $\angle PQR$?

- a) 95° b) 69°
 c) 147° d) 120°

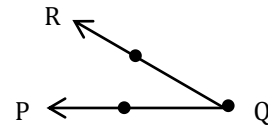
3)



Determine which choice best represents $\angle PQR$?

- a) 12° b) 42°
 c) 100° d) 123°

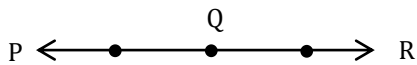
4)



Determine which choice best represents $\angle PQR$?

- a) 10° b) 63°
 c) 9° d) 32°

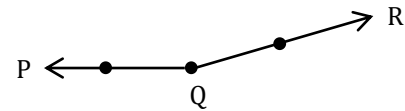
5)



Determine which choice best represents $\angle PQR$?

- a) 180° b) 72°
 c) 108° d) 111°

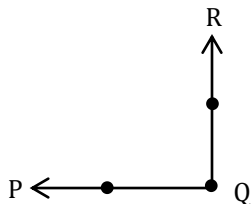
6)



Determine which choice best represents $\angle PQR$?

- a) 124° b) 112°
 c) 165° d) 180°

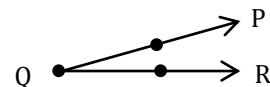
7)



Determine which choice best represents $\angle PQR$?

- a) 80° b) 45°
 c) 29° d) 90°

8)



Determine which choice best represents $\angle PQR$?

- a) 40° b) 18°
 c) 24° d) 10°