

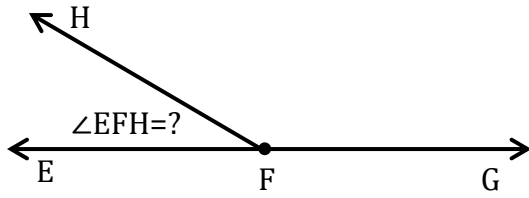
Measuring Angle

Name: _____

Date: _____

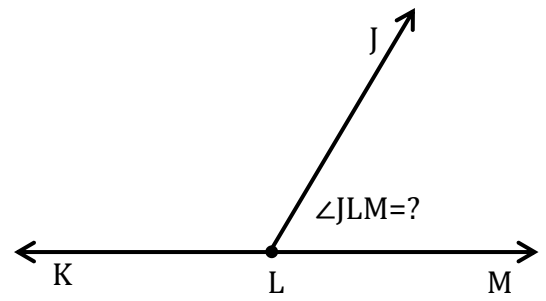
Measure the angle.

1)



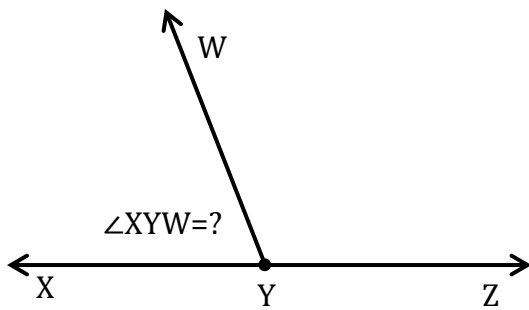
$\angle EFH =$ _____

2)



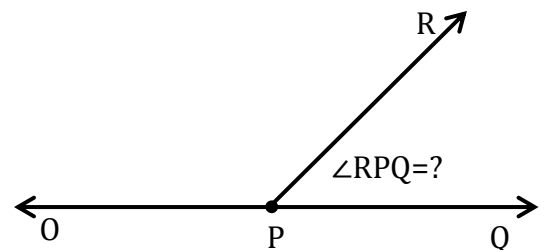
$\angle JLM =$ _____

3)



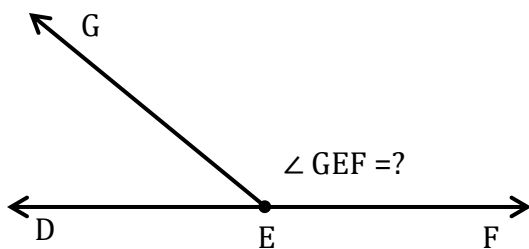
$\angle XYW =$ _____

4)



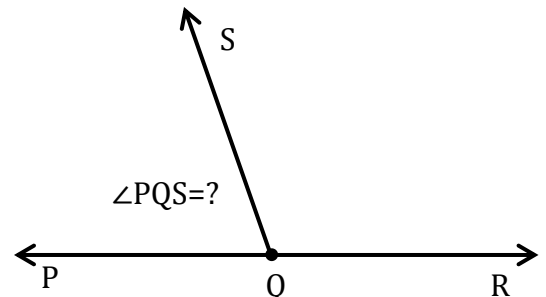
$\angle RPQ =$ _____

5)



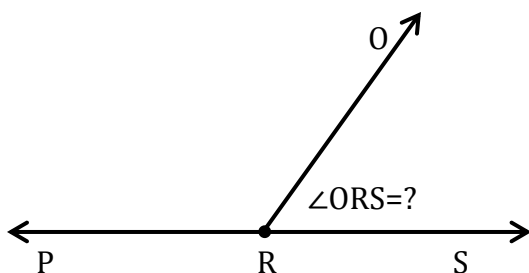
$\angle GEF =$ _____

6)



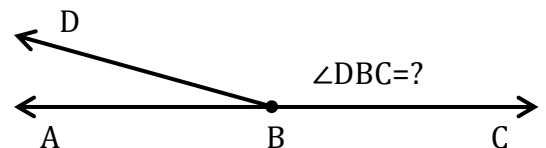
$\angle PQS =$ _____

7)



$\angle ORS =$ _____

8)



$\angle DBC =$ _____

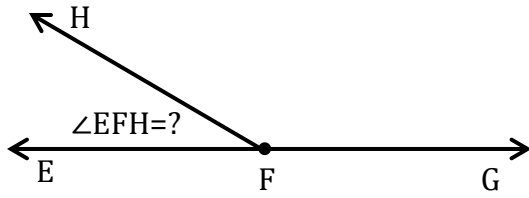
Measuring Angle

Name: _____

Date: _____

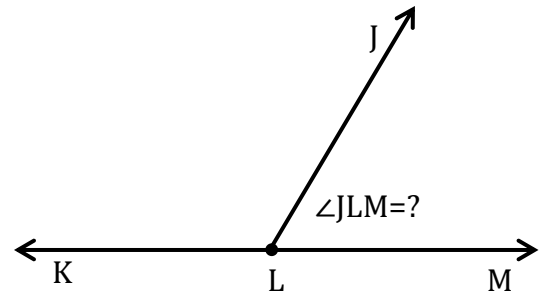
Measure the angle.

1)



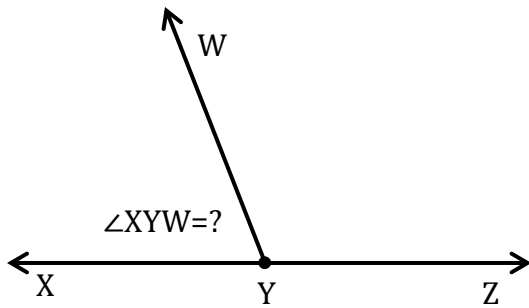
$$\angle EFH = \underline{30^\circ}$$

2)



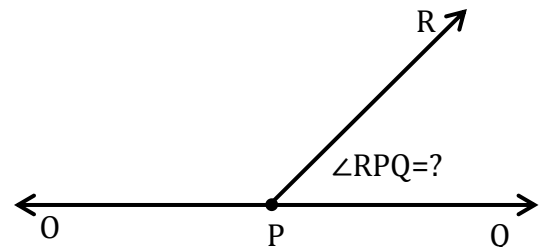
$$\angle JLM = \underline{60^\circ}$$

3)



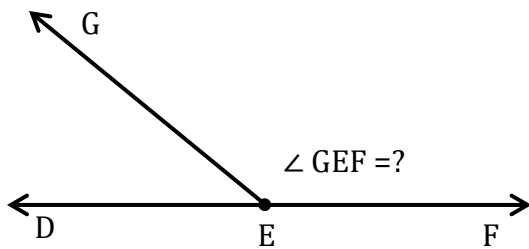
$$\angle XYW = \underline{70^\circ}$$

4)



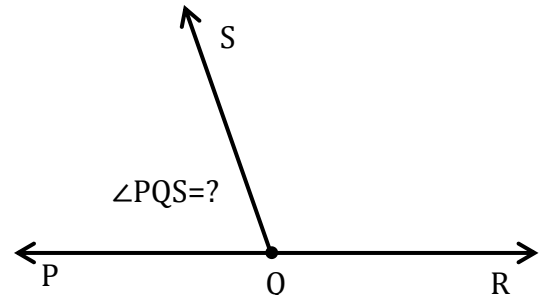
$$\angle RPQ = \underline{45^\circ}$$

5)



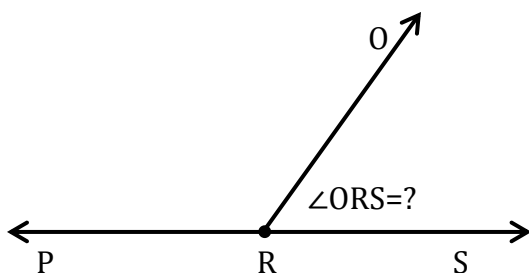
$$\angle GEF = \underline{140^\circ}$$

6)



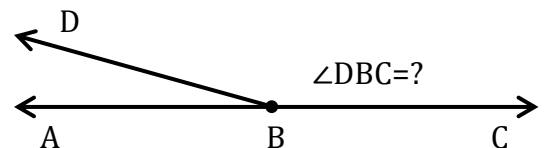
$$\angle PQS = \underline{70^\circ}$$

7)



$$\angle ORS = \underline{55^\circ}$$

8)



$$\angle DBC = \underline{165^\circ}$$